

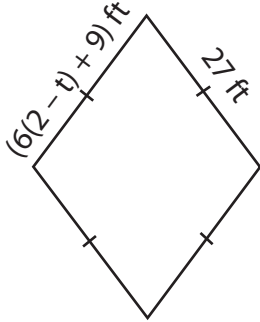
Name : _____

Multi-Step Equations: Shapes

Type 1: S3

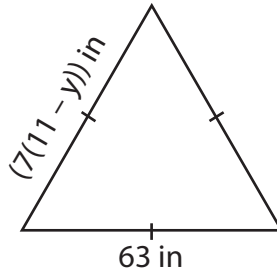
Find the unknown value given in each shape.

1)

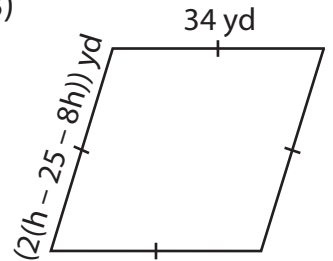


$t =$ _____

2)

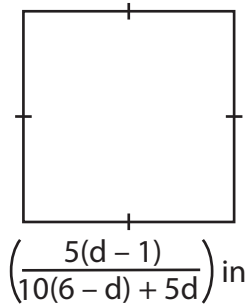


3)



$h =$ _____

4)



$d =$ _____

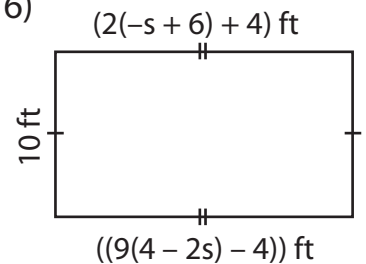
Gain complete access to the largest collection of worksheets in all subjects!

Members, please log in to download this worksheet.

Not a member? Please sign up to gain complete access.

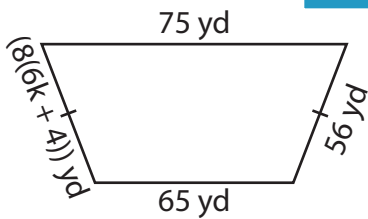
www.mathworksheets4kids.com

6)

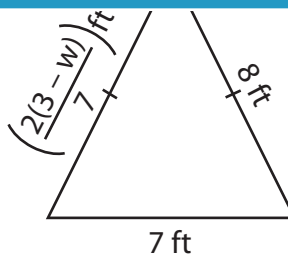


$s =$ _____

7)

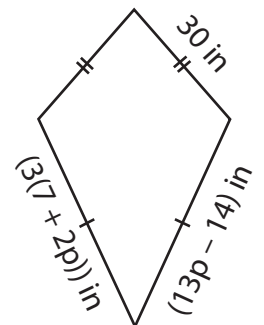


$k =$ _____



$w =$ _____

9)



$p =$ _____

Name : _____

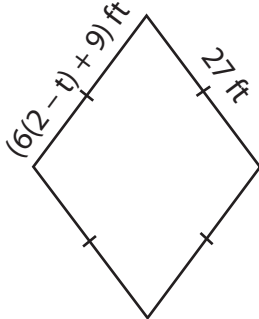
Answer Key

Multi-Step Equations: Shapes

Type 1: S3

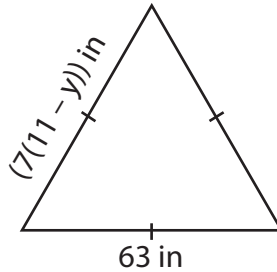
Find the unknown value given in each shape.

1)

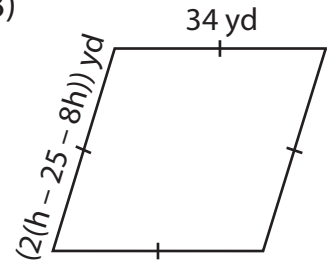


$t = \underline{\quad -1 \quad}$

2)

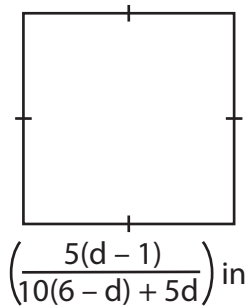


3)



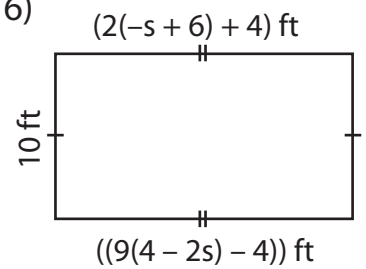
$h = \underline{\quad -6 \quad}$

4)



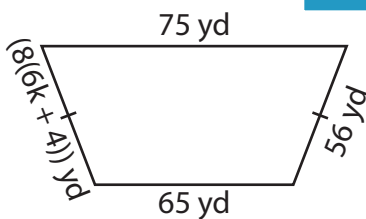
$d = \underline{\quad 11 \quad}$

6)

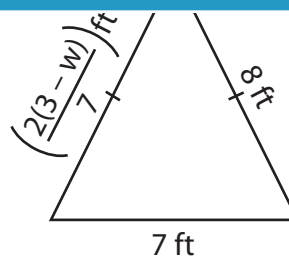


$s = \underline{\quad 1 \quad}$

7)

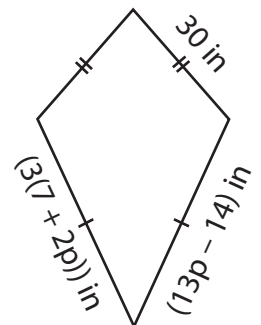


$k = \underline{\quad \frac{1}{2} \quad}$



$w = \underline{\quad -25 \quad}$

9)



$p = \underline{\quad 5 \quad}$

PREVIEW

Gain complete access to the largest collection of worksheets in all subjects!

Members, please log in to download this worksheet.

Not a member? Please sign up to gain complete access.

www.mathworksheets4kids.com