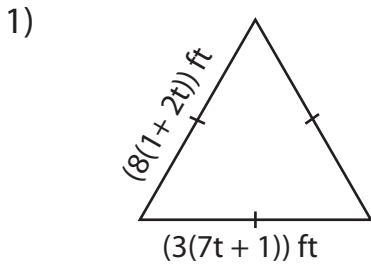


Name : _____

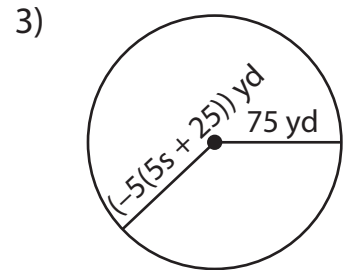
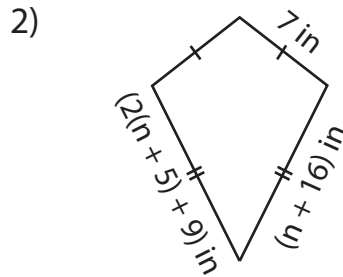
Multi-Step Equations: Shapes

Type 1: S4

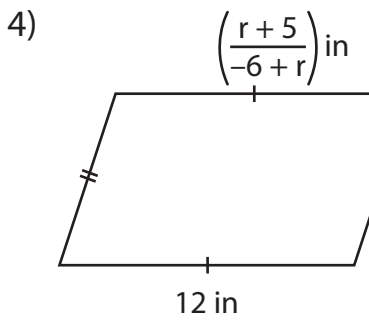
Find the unknown value given in each shape.



$t =$ _____



$s =$ _____



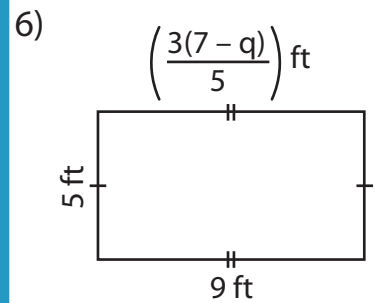
$r =$ _____

Gain complete access to the largest collection of worksheets in all subjects!

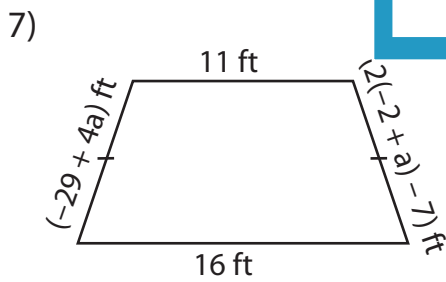
Members, please log in to download this worksheet.

Not a member? Please sign up to gain complete access.

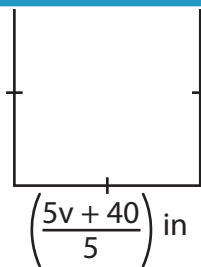
www.mathworksheets4kids.com



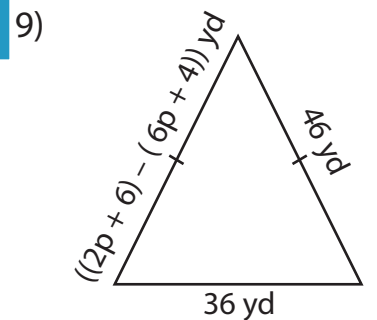
$q =$ _____



$a =$ _____



$v =$ _____



$p =$ _____

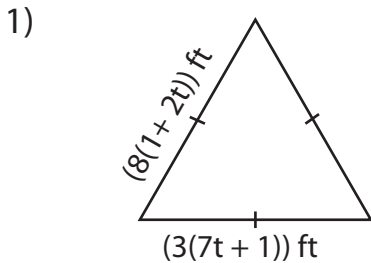
Name : _____

Answer Key

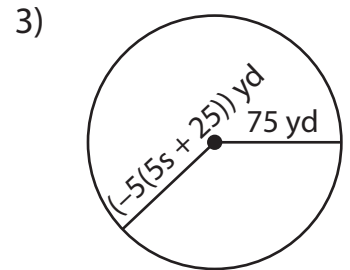
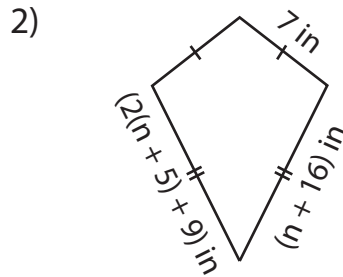
Multi-Step Equations: Shapes

Type 1: S4

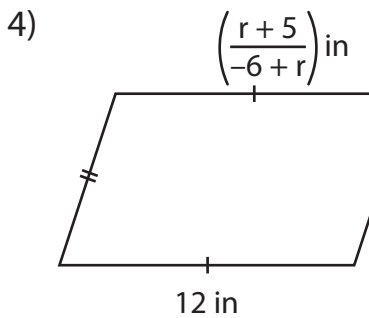
Find the unknown value given in each shape.



$t = \underline{\quad 1 \quad}$



$s = \underline{\quad -8 \quad}$



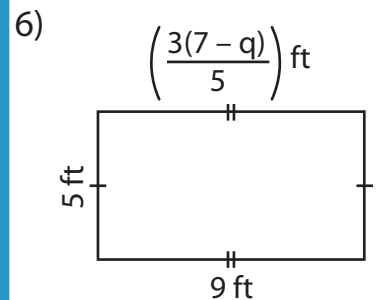
$r = \underline{\quad 7 \quad}$

Gain complete access to the largest collection of worksheets in all subjects!

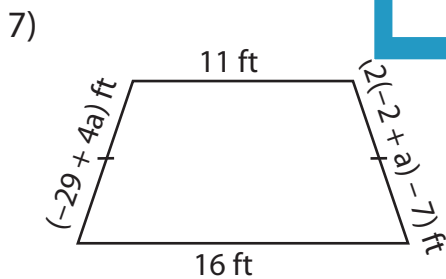
Members, please log in to download this worksheet.

Not a member? Please sign up to gain complete access.

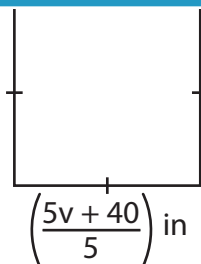
www.mathworksheets4kids.com



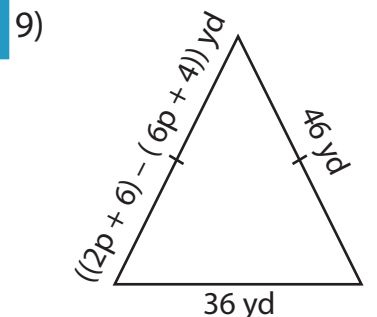
$q = \underline{\quad -8 \quad}$



$a = \underline{\quad 9 \quad}$



$v = \underline{\quad 12 \quad}$



$p = \underline{\quad -11 \quad}$