

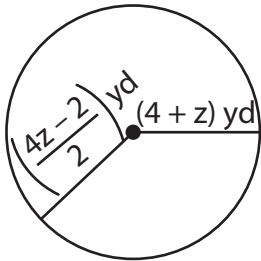
Name : _____

Multi-Step Equations: Shapes

Type 1: S5

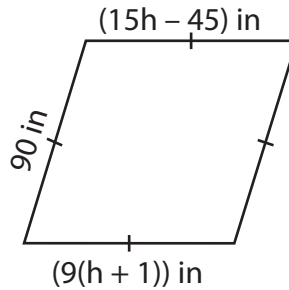
Find the unknown value given in each shape.

1)

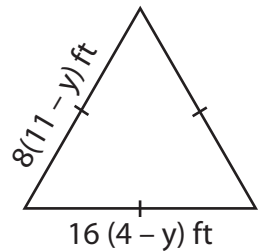


$z =$ _____

2)

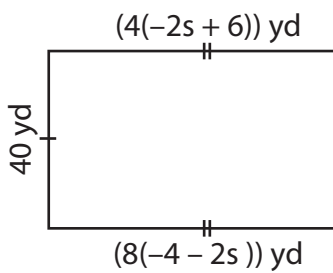


3)



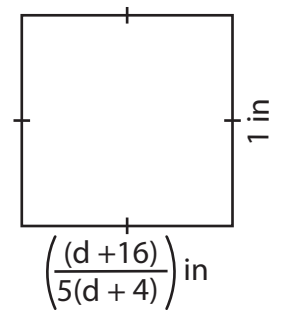
$y =$ _____

4)



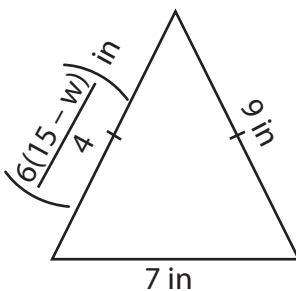
$s =$ _____

6)



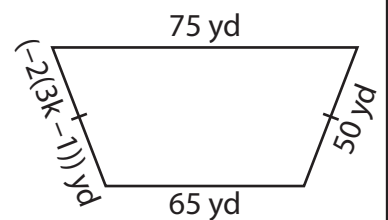
$d =$ _____

7)



$w =$ _____

9)



$k =$ _____

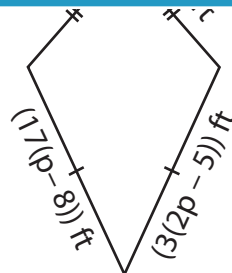
PREVIEW

Gain complete access to the largest collection of worksheets in all subjects!

Members, please log in to download this worksheet.

Not a member? Please sign up to gain complete access.

www.mathworksheets4kids.com



$p =$ _____

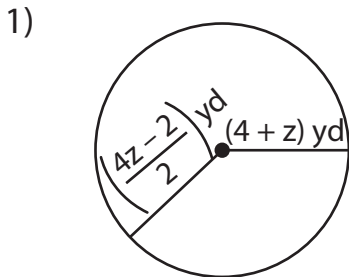
Name : _____

Answer Key

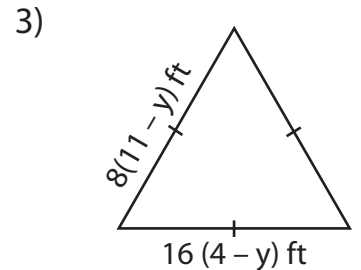
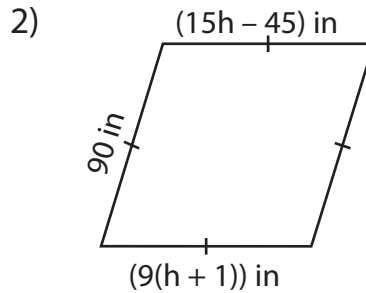
Multi-Step Equations: Shapes

Type 1: S5

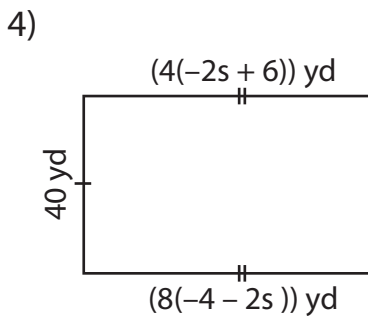
Find the unknown value given in each shape.



$z = \underline{\quad 5 \quad}$



$y = \underline{\quad -3 \quad}$



$s = \underline{\quad -7 \quad}$

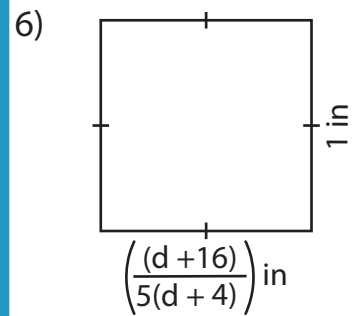
PREVIEW

Gain complete access to the largest collection of worksheets in all subjects!

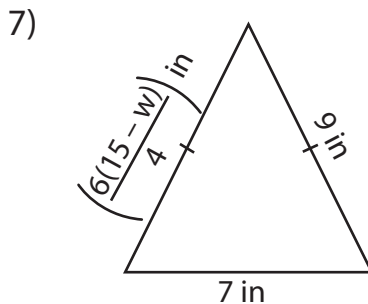
Members, please log in to download this worksheet.

Not a member? Please sign up to gain complete access.

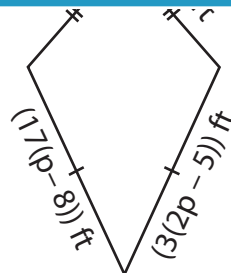
www.mathworksheets4kids.com



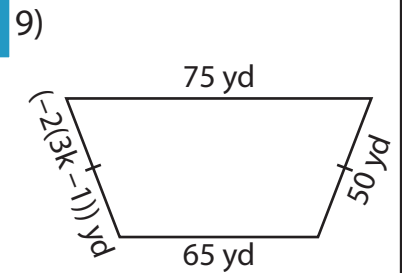
$d = \underline{\quad -1 \quad}$



$w = \underline{\quad 9 \quad}$



$p = \underline{\quad 11 \quad}$



$k = \underline{\quad -8 \quad}$