

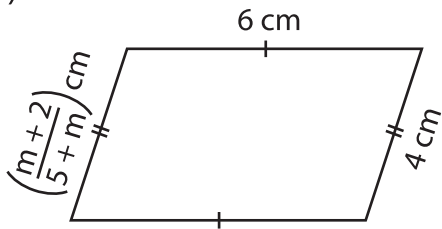
Name : _____

Multi-Step Equations: Shapes

Type 1: S1

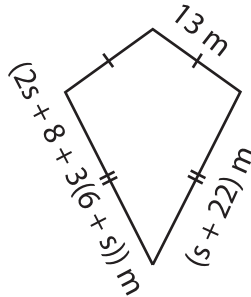
Find the unknown value given in each shape.

1)



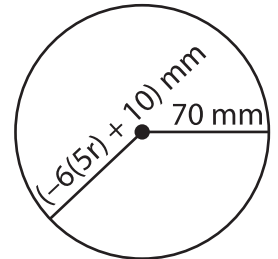
$m = \underline{\hspace{2cm}}$

2)



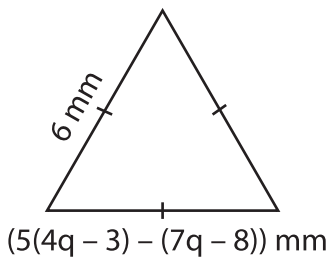
$s = \underline{\hspace{2cm}}$

3)



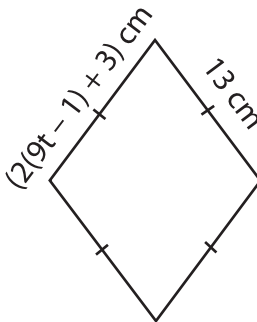
$r = \underline{\hspace{2cm}}$

4)



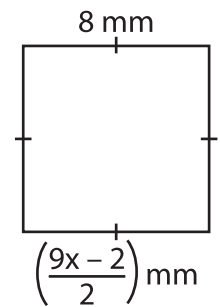
$q = \underline{\hspace{2cm}}$

5)



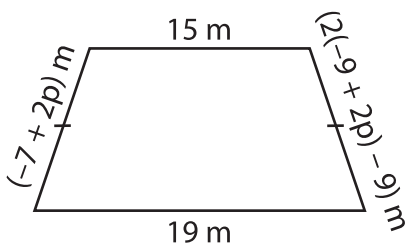
$t = \underline{\hspace{2cm}}$

6)



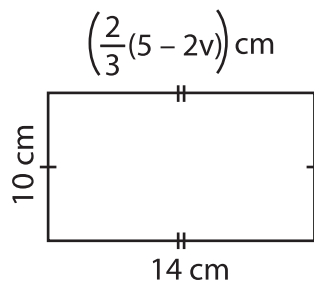
$x = \underline{\hspace{2cm}}$

7)



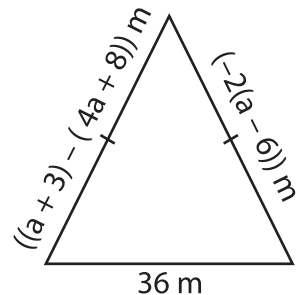
$p = \underline{\hspace{2cm}}$

8)



$v = \underline{\hspace{2cm}}$

9)



$a = \underline{\hspace{2cm}}$