
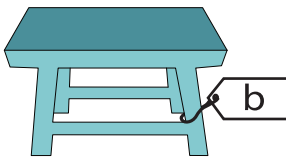
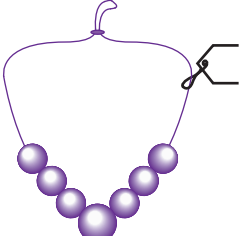



Cost of Objects

Find the cost of the objects.

1)  +  = \$95 ; b = _____

2)  ;  x = _____

3)  ;  r = _____

4)  ;  h = _____

5)  -  = \$85 ; u = _____

6)  -  = \$9 ; d = _____

PREVIEW

Gain complete access to the largest collection of worksheets in all subjects!

Members, please log in to download this worksheet.

Not a member? Please sign up to gain complete access.

www.mathworksheets4kids.com