
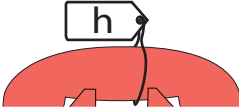
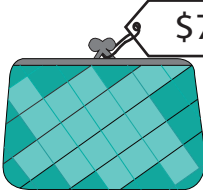


Cost of Objects

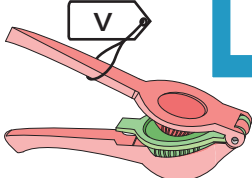

Find the cost of the objects.


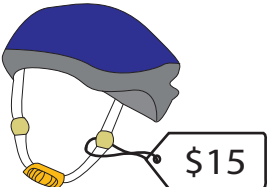
1)  -  = \$13; s = _____

2)  -  = _____; h = _____

3)  + _____ = _____; m = _____

4)  + _____ = _____; g = _____

5)  +  = \$28; v = _____

6)  -  = \$4; k = _____

PREVIEW

Gain complete access to the largest
collection of worksheets in all subjects!

Members, please
log in to
download this
worksheet.


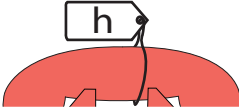
Not a member?
Please sign up to
gain complete
access.

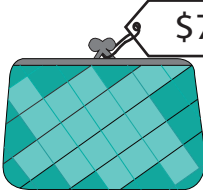
www.mathworksheets4kids.com

Cost of Objects

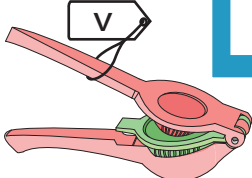

Find the cost of the objects.


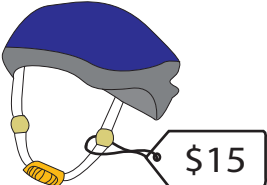
1)  -  = \$13; s = \$18

2)  +  = \$67; h = \$39

3)  + m = \$35; m = \$28

4)  + g = \$56; g = \$23

5)  +  = \$28; v = \$9

6)  -  = \$4; k = \$19

PREVIEW

Gain complete access to the largest collection of worksheets in all subjects!

Members, please log in to download this worksheet.

Not a member? Please sign up to gain complete access.

www.mathworksheets4kids.com