

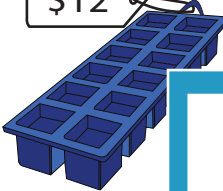
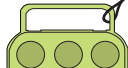



Cost of Objects



Find the cost of the objects.

1)  $\$38$ +  k = $\$70$; $k =$ _____

2)  $\$12$ +  n = _____

3)  q = _____

4)  r = _____

5)  p -  = $\$56$; $p =$ _____

6)  s -  $\$14$ = $\$4$; $s =$ _____

PREVIEW

Gain complete access to the largest collection of worksheets in all subjects!



Members, please log in to download this worksheet.

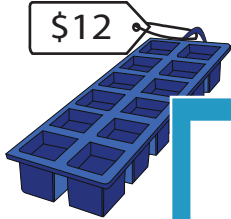

Not a member? Please sign up to gain complete access.

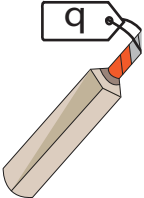
www.mathworksheets4kids.com

Cost of Objects

Find the cost of the objects.

1)  +  = \$70; k = \$32

2)  +  = \$19; n = \$7

3)  = \$38; q = \$38

4)  = \$46; r = \$46

5)  -  = \$56; p = \$79

6)  -  = \$4; s = \$18

PREVIEW

Gain complete access to the largest
collection of worksheets in all subjects!

Members, please
log in to
download this
worksheet.

Not a member?
Please sign up to
gain complete
access.

www.mathworksheets4kids.com