

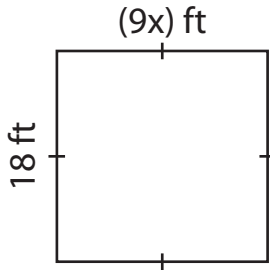
Name : _____

One-Step Equations: Shapes

Type 1: S1

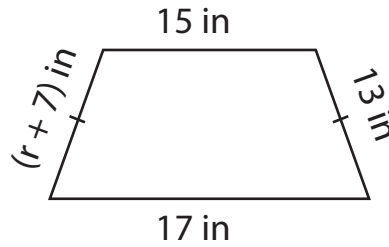
Find the unknown value given in each shape.

1)

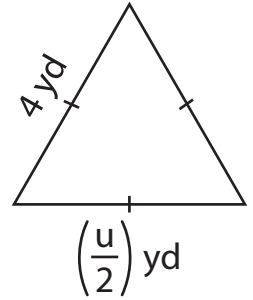


$x =$ _____

2)

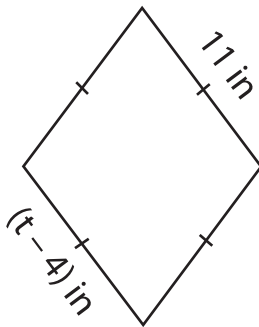


3)



$u =$ _____

4)



$t =$ _____

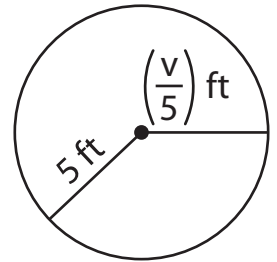
Gain complete access to the largest collection of worksheets in all subjects!

Members, please log in to download this worksheet.

Not a member? Please sign up to gain complete access.

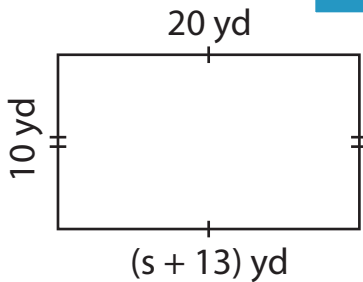
www.mathworksheets4kids.com

6)

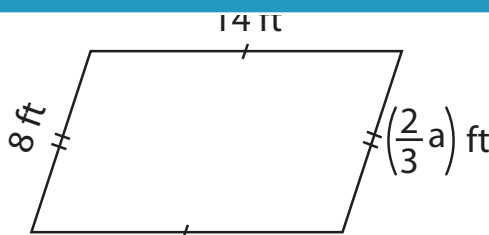


$v =$ _____

7)

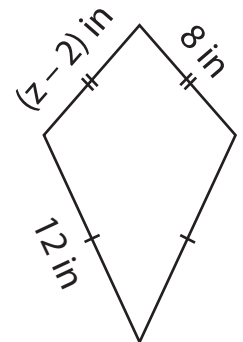


$s =$ _____



$a =$ _____

9)



$z =$ _____