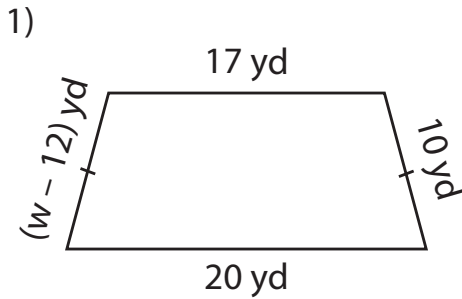


Name : _____

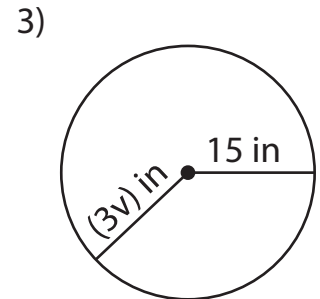
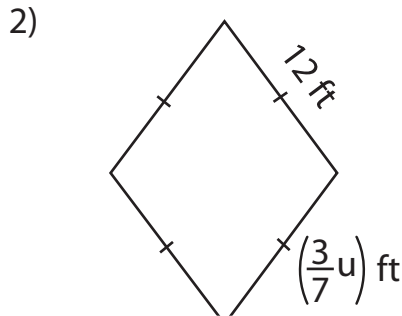
One-Step Equations: Shapes

Type 1: S3

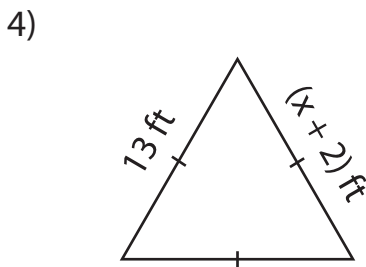
Find the unknown value given in each shape.



$w =$ _____



$v =$ _____



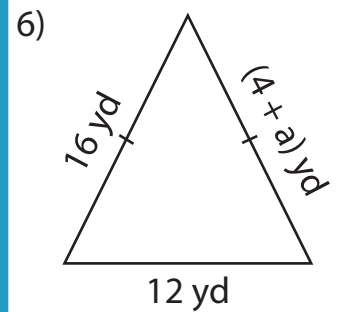
$x =$ _____

Gain complete access to the largest collection of worksheets in all subjects!

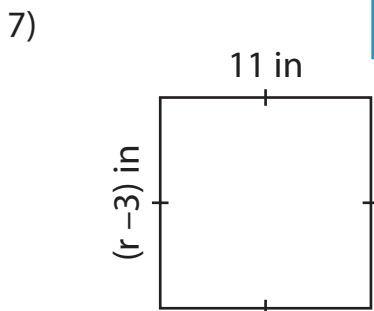
Members, please log in to download this worksheet.

Not a member? Please sign up to gain complete access.

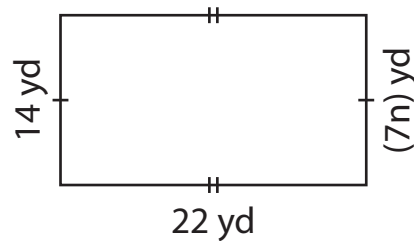
www.mathworksheets4kids.com



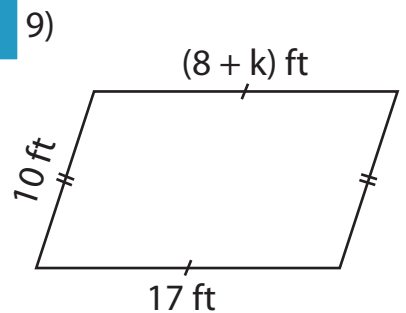
$a =$ _____



$r =$ _____



$n =$ _____



$k =$ _____

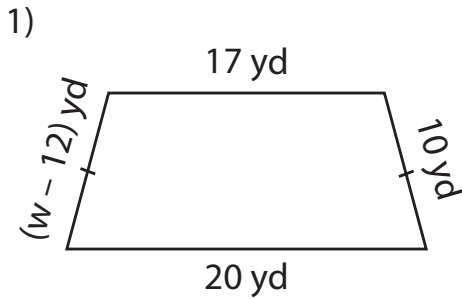
Name : _____

Answer Key

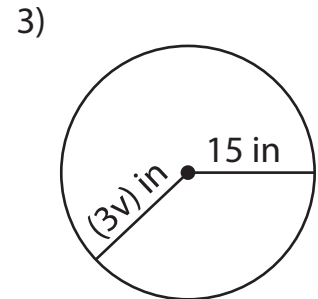
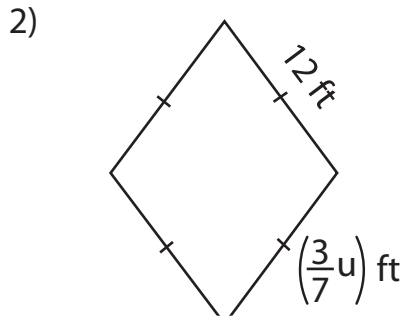
One-Step Equations: Shapes

Type 1: S3

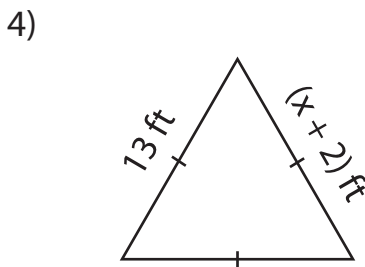
Find the unknown value given in each shape.



$w = \underline{22}$



$v = \underline{5}$



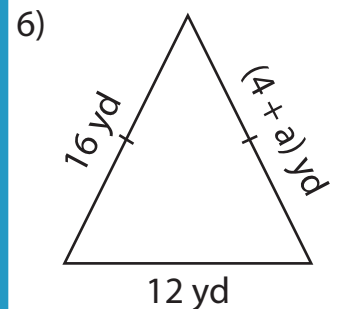
$x = \underline{11}$

Gain complete access to the largest collection of worksheets in all subjects!

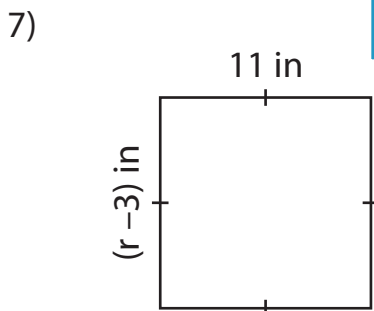
Members, please log in to download this worksheet.

Not a member? Please sign up to gain complete access.

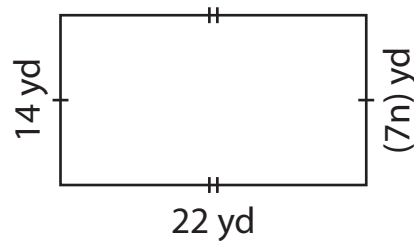
www.mathworksheets4kids.com



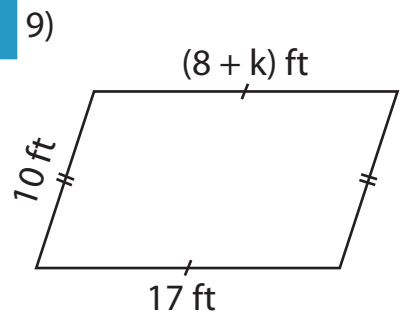
$a = \underline{12}$



$r = \underline{14}$



$n = \underline{2}$



$k = \underline{9}$