

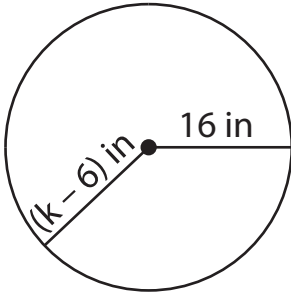
Name : _____

One-Step Equations: Shapes

Type 1: S5

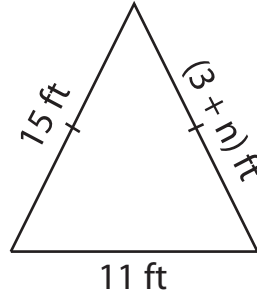
Find the unknown value given in each shape.

1)

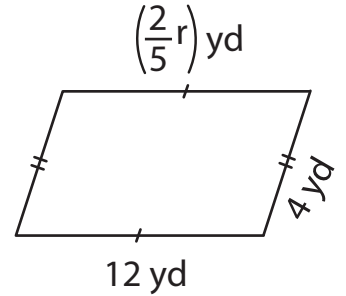


$k =$ _____

2)

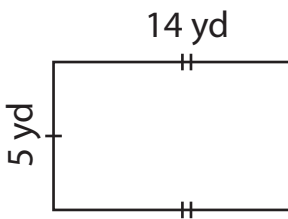


3)



$r =$ _____

4)



$u =$ _____

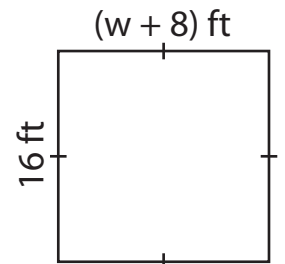
Gain complete access to the largest collection of worksheets in all subjects!

Members, please log in to download this worksheet.

Not a member? Please sign up to gain complete access.

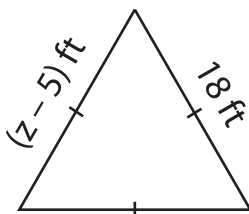
www.mathworksheets4kids.com

6)

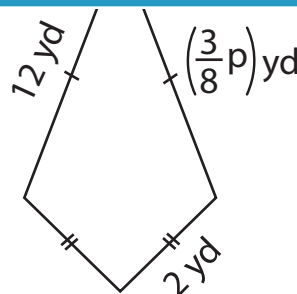


$w =$ _____

7)

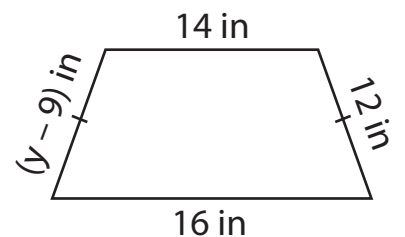


$z =$ _____



$p =$ _____

9)



$y =$ _____

Name : _____

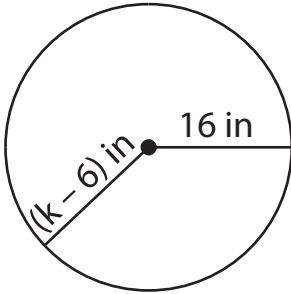
Answer Key

One-Step Equations: Shapes

Type 1: S5

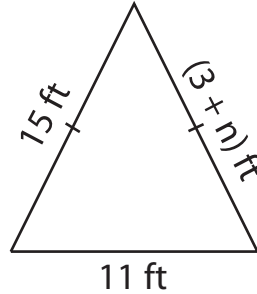
Find the unknown value given in each shape.

1)

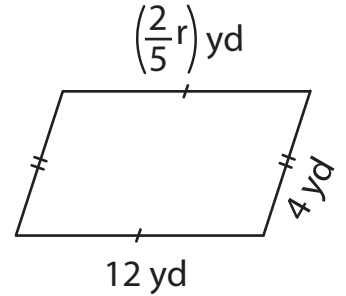


$k = \underline{22}$

2)

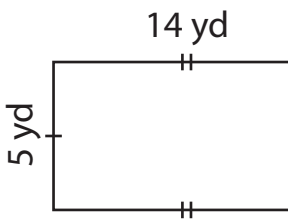


3)



$r = \underline{30}$

4)



$u = \underline{10}$

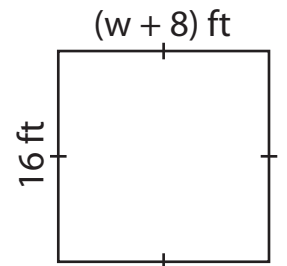
Gain complete access to the largest collection of worksheets in all subjects!

Members, please log in to download this worksheet.

Not a member? Please sign up to gain complete access.

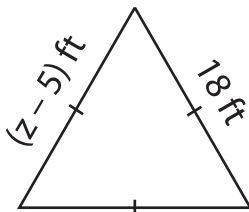
www.mathworksheets4kids.com

6)

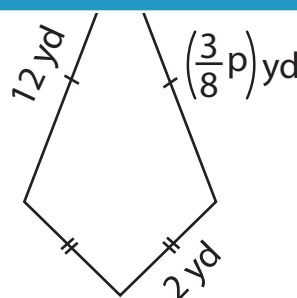


$w = \underline{8}$

7)

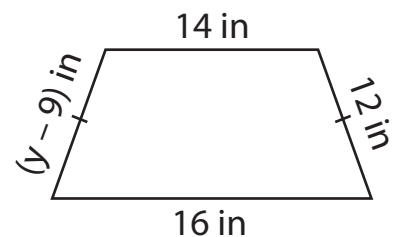


$z = \underline{23}$



$p = \underline{32}$

9)



$y = \underline{21}$