

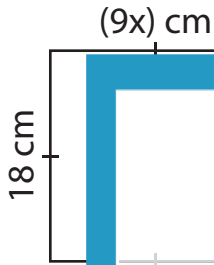
Name : _____

One-Step Equations: Shapes

Type 1: S1

Find the unknown value given in each shape.

1)



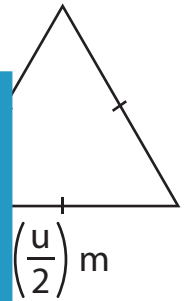
x = _____

2)

15 mm

r = _____

3)

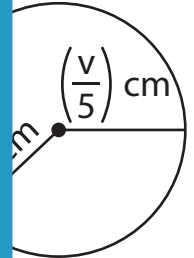


u = _____

4)

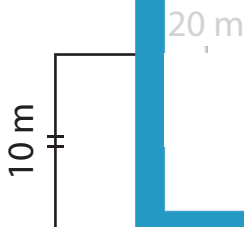


t = _____



v = _____

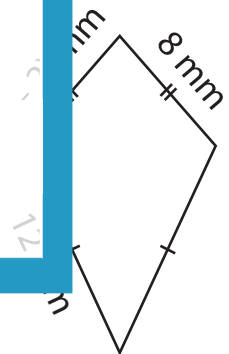
7)



s = _____

14 cm

a = _____



z = _____

PREVIEW

Gain complete access to the largest
collection of worksheets in all subjects!

Members, please
log in to
download this
worksheet.

Not a member?
Please sign up to
gain complete
access.

www.mathworksheets4kids.com