

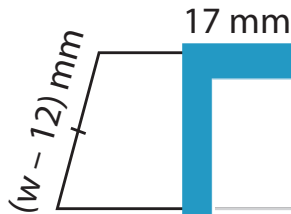
Name : _____

One-Step Equations: Shapes

Type 1: S3

Find the unknown value given in each shape.

1)



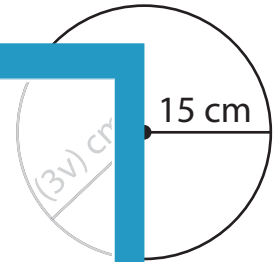
$w =$ _____

2)



$v =$ _____

3)



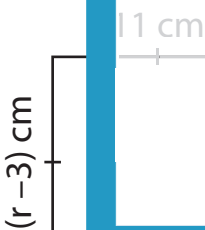
$a =$ _____

4)



$r =$ _____

7)



$r =$ _____

$n =$ _____

$k =$ _____

PREVIEW

Gain complete access to the largest
collection of worksheets in all subjects!

Members, please
log in to
download this
worksheet.

Not a member?
Please sign up to
gain complete
access.

www.mathworksheets4kids.com