

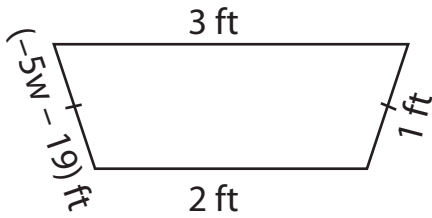
Name : _____

Two-Step Equations: Shapes

Type 1: S2

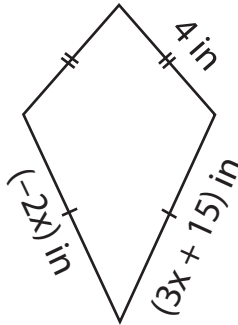
Find the unknown value given in each shape.

1)

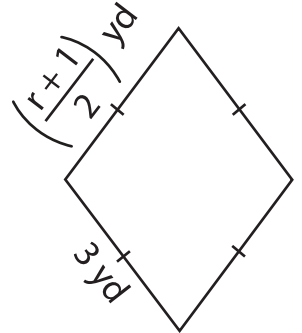


w = _____

2)

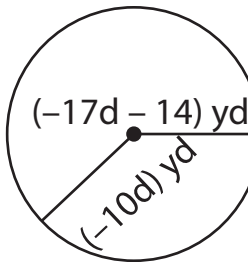


3)



r = _____

4)



d = _____

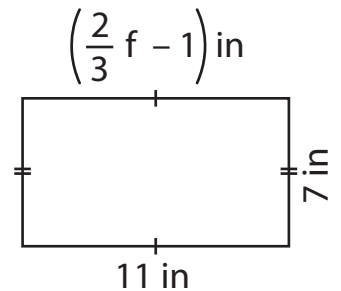
Gain complete access to the largest collection of worksheets in all subjects!

Members, please log in to download this worksheet.

Not a member? Please sign up to gain complete access.

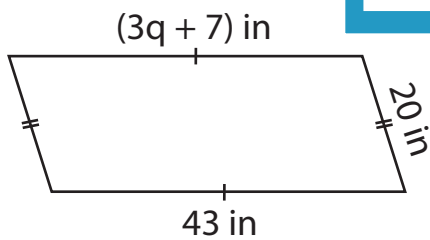
www.mathworksheets4kids.com

5)



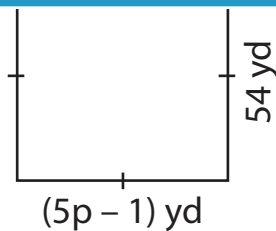
f = _____

7)

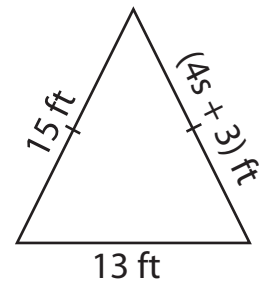


q = _____

8)



p = _____



s = _____

Name: _____

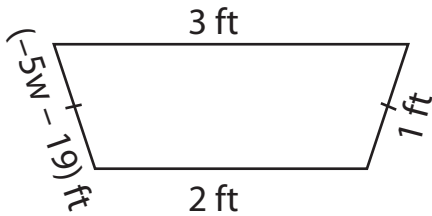
Answer Key

Two-Step Equations: Shapes

Type 1: S2

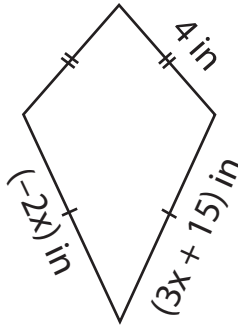
Find the unknown value given in each shape.

1)

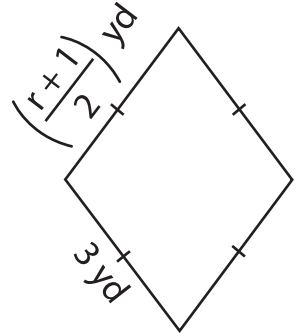


w = -4

2)



3)



r = 5

PREVIEW

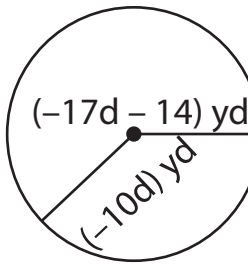
Gain complete access to the largest collection of worksheets in all subjects!

Members, please log in to download this worksheet.

Not a member? Please sign up to gain complete access.

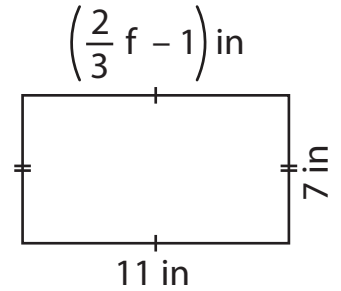
www.mathworksheets4kids.com

4)



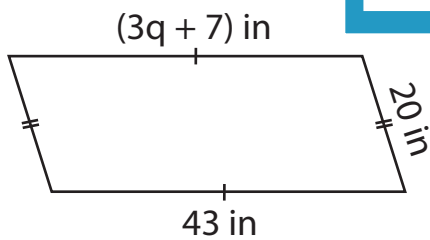
d = -2

5)



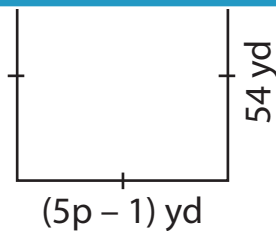
f = 18

7)

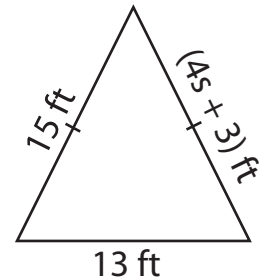


q = 12

8)



p = 11



s = 3