

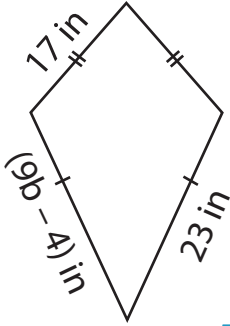
Name: _____

Two-Step Equations: Shapes

Type 1: S3

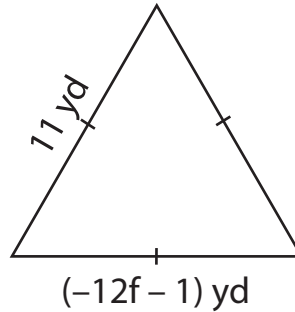
Find the unknown value given in each shape.

1)

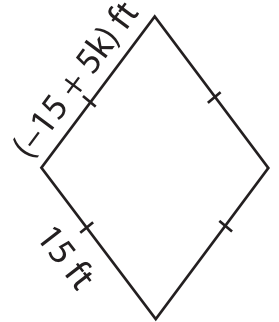


$b =$ _____

2)

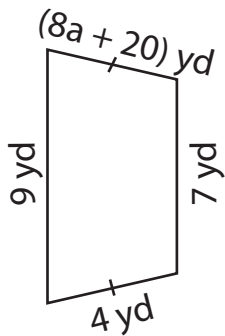


3)



$k =$ _____

4)



$a =$ _____

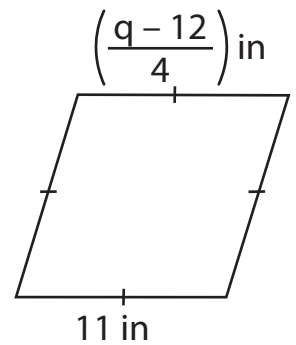
Gain complete access to the largest collection of worksheets in all subjects!

Members, please log in to download this worksheet.

Not a member? Please sign up to gain complete access.

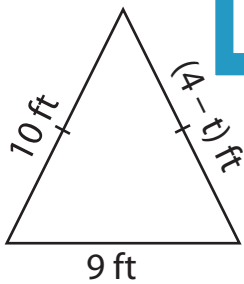
www.mathworksheets4kids.com

5)

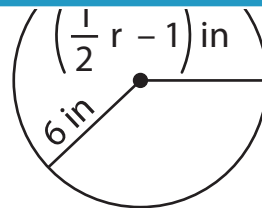


$q =$ _____

7)

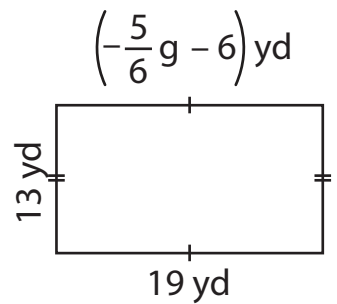


$t =$ _____



$r =$ _____

9)



$g =$ _____

Name : _____

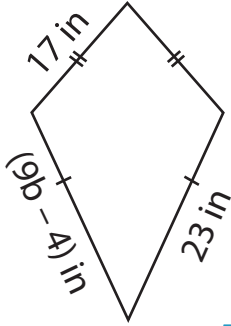
Answer Key

Two-Step Equations: Shapes

Type 1: S3

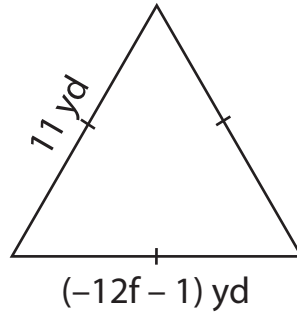
Find the unknown value given in each shape.

1)

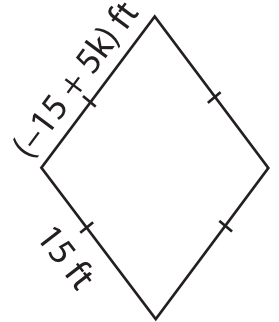


$b = \underline{\quad 3 \quad}$

2)

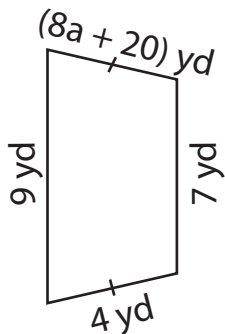


3)



$k = \underline{\quad 6 \quad}$

4)



$a = \underline{\quad -2 \quad}$

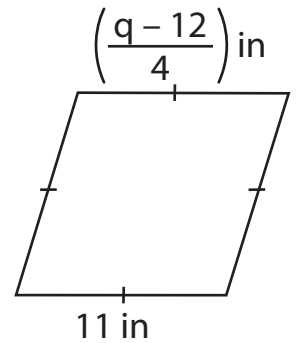
Gain complete access to the largest collection of worksheets in all subjects!

Members, please log in to download this worksheet.

Not a member? Please sign up to gain complete access.

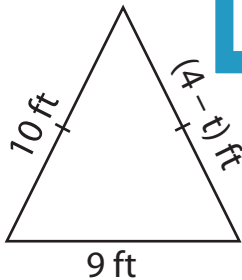
www.mathworksheets4kids.com

5)

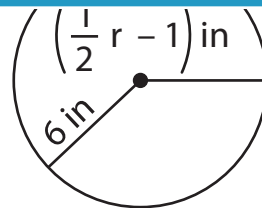


$q = \underline{\quad 56 \quad}$

7)

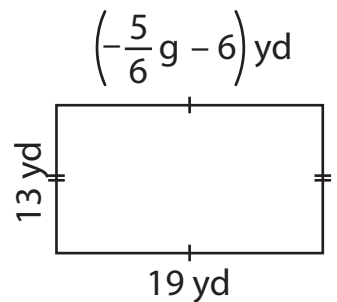


$t = \underline{\quad -6 \quad}$



$r = \underline{\quad 14 \quad}$

9)



$g = \underline{\quad -30 \quad}$