

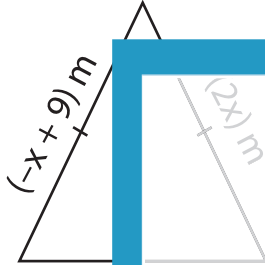
Name : _____

Two-Step Equations: Shapes

Type 1: S1

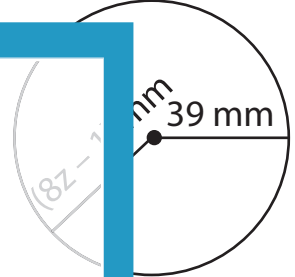
Find the unknown value given in each shape.

1)



2)

3)



$x =$ _____

$b =$ _____

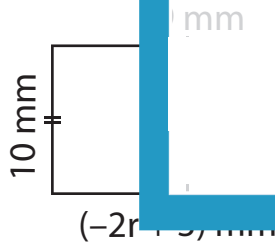
$z =$ _____

4)



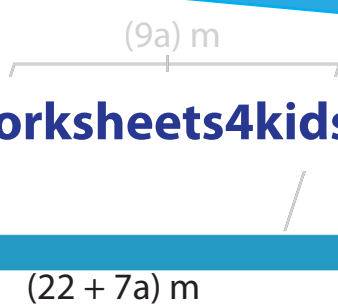
$v =$ _____

7)



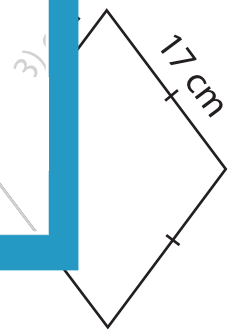
$r =$ _____

8)



$a =$ _____

9)



$t =$ _____

PREVIEW

Gain complete access to the largest
collection of worksheets in all subjects!

Members, please
log in to
download this
worksheet.

Not a member?
Please sign up to
gain complete
access.

www.mathworksheets4kids.com