

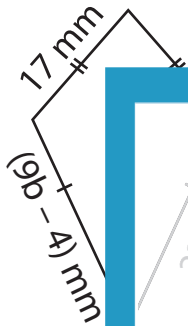
Name : _____

Two-Step Equations: Shapes

Type 1: S3

Find the unknown value given in each shape.

1)



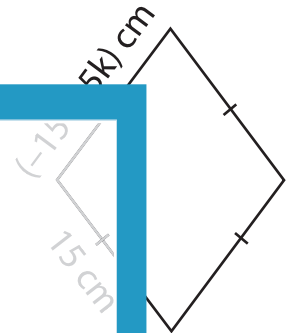
$b =$ _____

2)



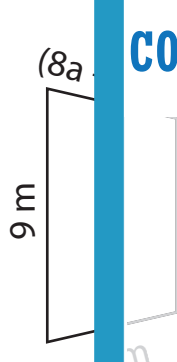
$f =$ _____

3)



$k =$ _____

4)



$a =$ _____

7)



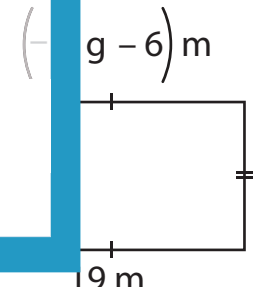
$t =$ _____

8)



$r =$ _____

9)



$g =$ _____

PREVIEW

Gain complete access to the largest collection of worksheets in all subjects!

Members, please log in to download this worksheet.

Not a member? Please sign up to gain complete access.

www.mathworksheets4kids.com