

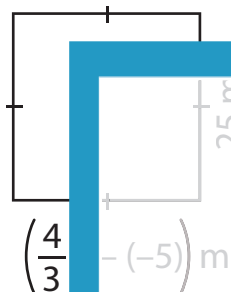
Name : _____

Two-Step Equations: Shapes

Type 1: S5

Find the unknown value given in each shape.

1)



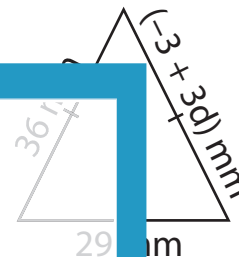
$r =$ _____

2)



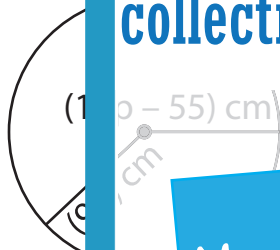
$k =$ _____

3)



$d =$ _____

4)



$p =$ _____

7)



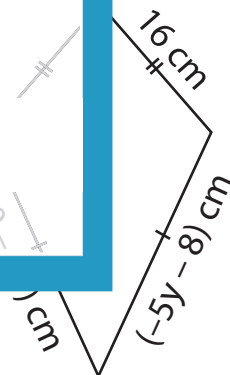
$a =$ _____

8)

13 m

$w =$ _____

9)



$y =$ _____

PREVIEW

Gain complete access to the largest
collection of worksheets in all subjects!

Members, please
log in to
download this
worksheet.

Not a member?
Please sign up to
gain complete
access.

www.mathworksheets4kids.com