



Name : _____

Compare & Estimate the Count

Sheet 1

Estimate the number of objects.

1)

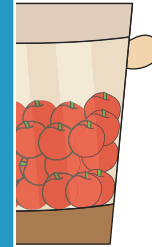


About 40 chocolates

2)



About




3)




About



4)



About 80 bananas



PREVIEW

Gain complete access to the largest collection of worksheets in all subjects!

Members, please log in to download this worksheet.

Not a member? Please sign up to gain complete access.

www.mathworksheets4kids.com

Name : _____

Answer Key

Compare & Estimate the Count

Sheet 1

Estimate the number of objects.

1) **About 30 chocolates**

2) **About 35 cherries**

3) **About 45 c**

4) **About 20 b**

PREVIEW

Gain complete access to the largest collection of worksheets in all subjects!

Members, please log in to download this worksheet.

Not a member? Please sign up to gain complete access.

www.mathworksheets4kids.com