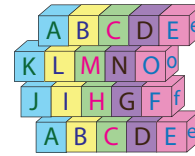
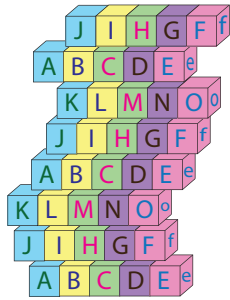


Compare & Estimate the Count

Estimate the number of objects.

1)



About 50 blocks

2)



Al

PREVIEW

Gain complete access to the largest collection of worksheets in all subjects!

Members, please log in to download this worksheet.

Not a member? Please sign up to gain complete access.

www.mathworksheets4kids.com




3)




Ab



4)



About 40 pills



Name : _____

Answer Key

Compare & Estimate the Count

Sheet 3

Estimate the number of objects.

1) **About 25 blocks**

2) **About 60 cups**

3) **About 15 b**

4) **About 20 p**

PREVIEW

Gain complete access to the largest collection of worksheets in all subjects!

Members, please log in to download this worksheet.

Not a member? Please sign up to gain complete access.

www.mathworksheets4kids.com