



Name : _____

Compare & Estimate the Count

Sheet 2

Estimate the number of objects.

1)



_____ About 25 bananas

2)



_____ About _____

PREVIEW

Gain complete access to the largest collection of worksheets in all subjects!

Members, please log in to download this worksheet.

Not a member? Please sign up to gain complete access.

www.mathworksheets4kids.com




_____ plates


3)



4)



_____ About 10 beetroots



Name : _____

Answer Key

Compare & Estimate the Count

Sheet 2

Estimate the number of objects.

1) **About 50 bananas**

2) **About 15 storage boxes**

3) **About 75 p**

4) **About 20 b**

PREVIEW

Gain complete access to the largest collection of worksheets in all subjects!

Members, please log in to download this worksheet.

Not a member? Please sign up to gain complete access.

www.mathworksheets4kids.com