



Compare & Estimate the Count

Estimate the number of objects.

1)



_____ About 30 tomatoes

2)

PREVIEW

Gain complete access to the largest collection of worksheets in all subjects!

Members, please log in to download this worksheet.

Not a member? Please sign up to gain complete access.

www.mathworksheets4kids.com



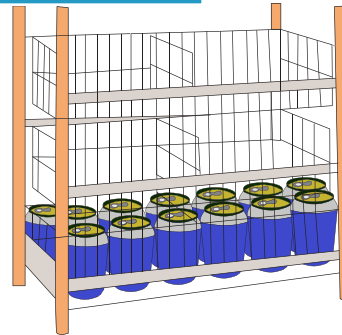

_____ 3 coins

3)



_____ All

4)



_____ About 45 soda cans

Name : _____

Answer Key

Compare & Estimate the Count

Sheet 3

Estimate the number of objects.

1) **About 45 tomatoes**

2) **About 20 coins**

3) **About 60 c**

4) **About 15 s**

PREVIEW

Gain complete access to the largest collection of worksheets in all subjects!

Members, please log in to download this worksheet.

Not a member? Please sign up to gain complete access.

www.mathworksheets4kids.com