

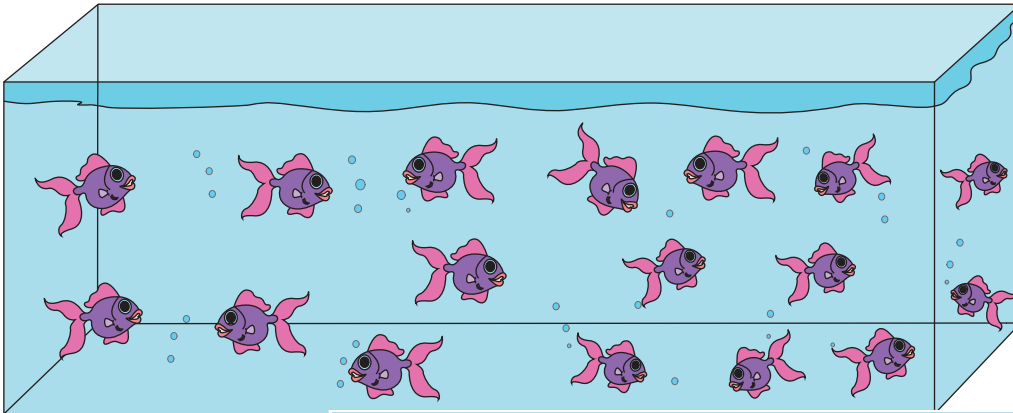
Name : _____

Estimation: MCQ

Sheet 1


Estimate the number of fish in each tank.

1)



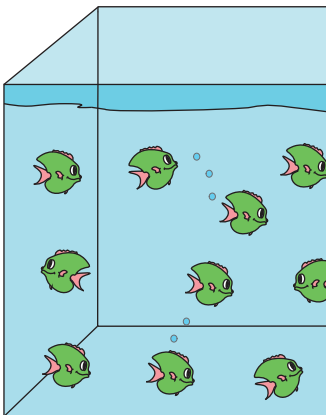
- a) About 20
- b) About 30

2)



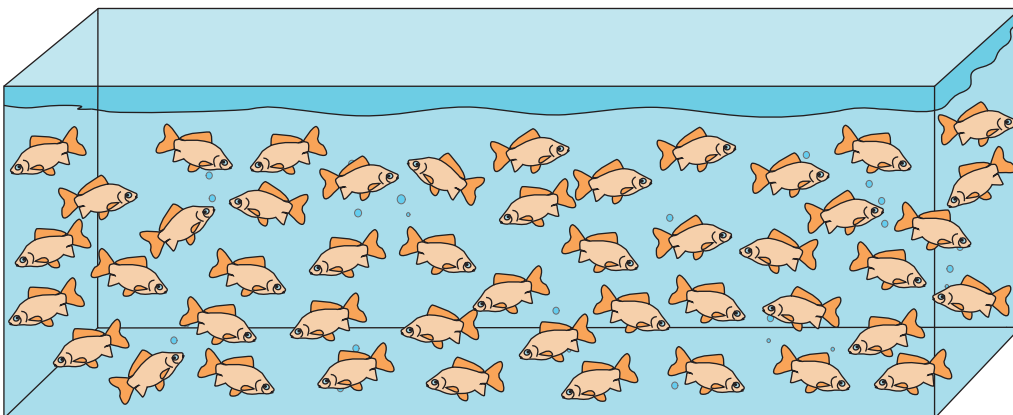
- a) About 25
- b) About 40

3)



- a) About 45
- b) About 30

4)



- a) About 50
- b) About 35

PREVIEW

Gain complete access to the largest collection of worksheets in all subjects!

Members, please log in to download this worksheet.

Not a member? Please sign up to gain complete access.

www.mathworksheets4kids.com