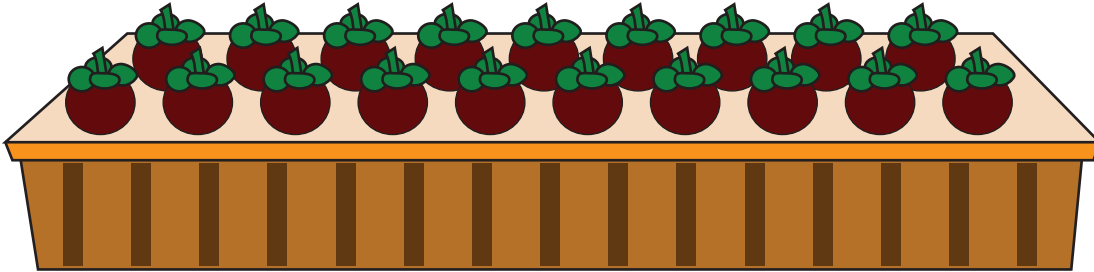


Estimation: MCQ


Estimate the number of fruits on each table.

1)



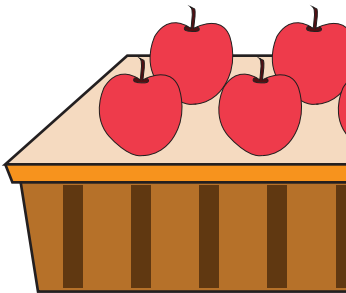
- a) About 35
- b) About 20

2)




- a) About 40
- b) About 30

3)



- a) About 15
- b) About 10

4)



- a) About 20
- b) About 30

PREVIEW

Gain complete access to the largest collection of worksheets in all subjects!

Members, please log in to download this worksheet.

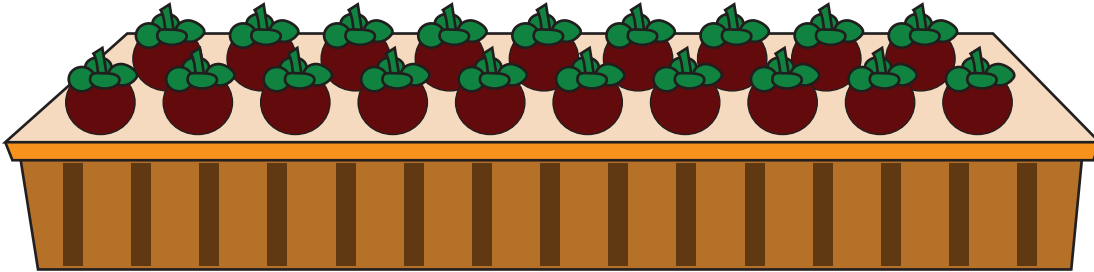
Not a member? Please sign up to gain complete access.

www.mathworksheets4kids.com

Estimation: MCQ

Estimate the number of fruits on each table.


1)



a) About 35

 b) About 20

2)



PREVIEW

Gain complete access to the largest
collection of worksheets in all subjects!

Members, please
log in to
download this
worksheet.

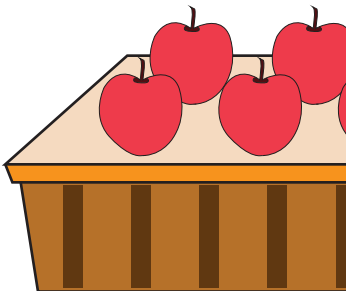
Not a member?
Please sign up to
gain complete
access.

www.mathworksheets4kids.com

 a) About 40


b) About 30

3)


 a) About 15

b) About 10

4)



a) About 20

 b) About 30