
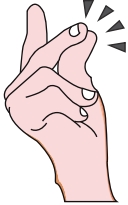




# Estimate the time

Sheet 2

Activity	My Estimate	Actual Time		
To count the pearls in a chain 				
To snap your fingers. 	<div style="border: 2px solid #00AEEF; padding: 10px; text-align: center;"> <h2 style="color: #00AEEF; margin: 0;">PREVIEW</h2> <p style="color: #00AEEF; font-weight: bold; margin: 5px 0;">Gain complete access to the largest collection of worksheets in all subjects!</p> <div style="display: flex; justify-content: space-around; margin: 10px 0;"> <div style="background-color: #00AEEF; color: white; padding: 10px; width: 45%; transform: rotate(-2deg);"> <p style="margin: 0;">Members, please log in to download this worksheet.</p> </div> <div style="background-color: #00AEEF; color: white; padding: 10px; width: 45%; transform: rotate(2deg);"> <p style="margin: 0;">Not a member? Please sign up to gain complete access.</p> </div> </div> <p style="color: #00AEEF; font-weight: bold; margin: 10px 0;">www.mathworksheets4kids.com</p> </div>			
To read the time. 				
To tie a shoe lace. 				
To yawn. 