


Name : _____

Fact Family - Addition & Subtraction

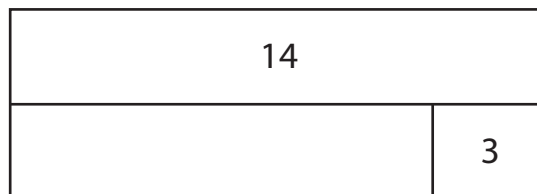
Sheet 2

Find the missing number in each bar model and write four different facts.

1)

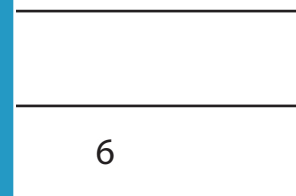



2)



_____ + _____	_____ - _____	_____ + _____	_____ = _____
_____ + _____			_____ = _____
_____ - _____			_____ = _____
_____ - _____			_____ = _____

3)



_____ + _____	_____ = _____	_____ + _____	_____ = _____
_____ + _____	_____ = _____	_____ + _____	_____ = _____
_____ - _____	_____ = _____	_____ - _____	_____ = _____
_____ - _____	_____ = _____	_____ - _____	_____ = _____

PREVIEW

Gain complete access to the largest collection of worksheets in all subjects!

Members, please log in to download this worksheet.

Not a member? Please sign up to gain complete access.

www.mathworksheets4kids.com