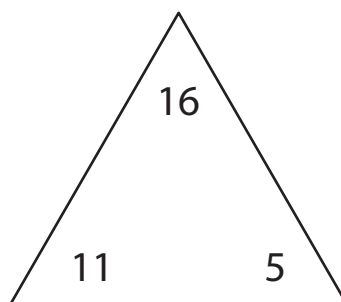


## Fact Family - Addition & Subtraction

Each triangle contains the numbers in a fact family. Use the numbers to complete the facts.

1)



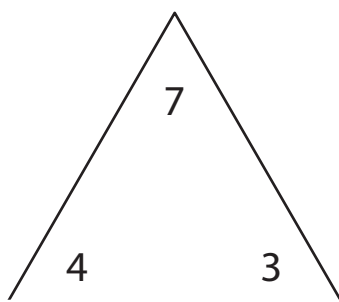
$11 + 5 = \underline{\quad}$

$5 + 11 = \underline{\quad}$

$16 - 11 = \underline{\quad}$

$16 - 5 = \underline{\quad}$

2)



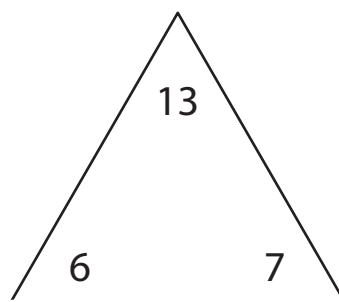
$4 + 3 = \underline{\quad}$

$3 + 4 = \underline{\quad}$

$7 - 4 = \underline{\quad}$

$7 - 3 = \underline{\quad}$

3)



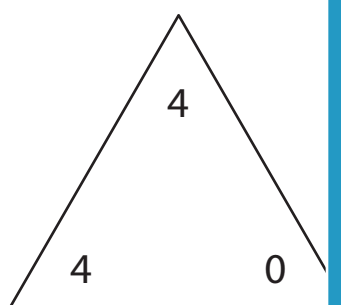
$6 + 7 = \underline{\quad}$

$7 + 6 = \underline{\quad}$

$13 - 7 = \underline{\quad}$

$13 - 6 = \underline{\quad}$

4)



$0 + 4 = \underline{\quad}$

$4 + 0 = \underline{\quad}$

$4 - 0 = \underline{\quad}$

$4 - 4 = \underline{\quad}$

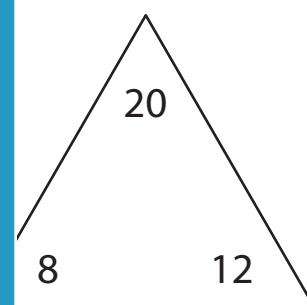


$14 + 4 = \underline{\quad}$

$4 + 14 = \underline{\quad}$

$18 - 4 = \underline{\quad}$

$18 - 14 = \underline{\quad}$



$8 + 12 = \underline{\quad}$

$12 + 8 = \underline{\quad}$

$20 - 8 = \underline{\quad}$

$20 - 12 = \underline{\quad}$

# PREVIEW

Gain complete access to the largest collection of worksheets in all subjects!

Members, please log in to download this worksheet.

Not a member? Please sign up to gain complete access.

[www.mathworksheets4kids.com](http://www.mathworksheets4kids.com)