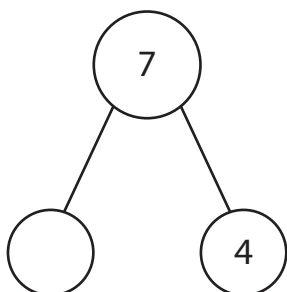


Fact Family - Addition & Subtraction

Find the missing number in each number bond and write four different facts.

1)



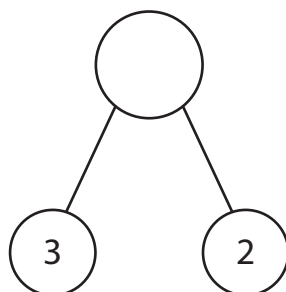
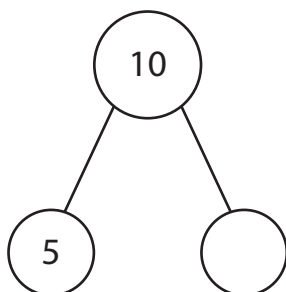
___ + ___ = ___

___ + ___ = ___

___ - ___ = ___

___ - ___ = ___

2)



3)

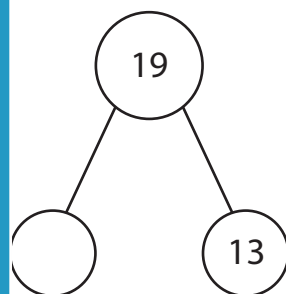
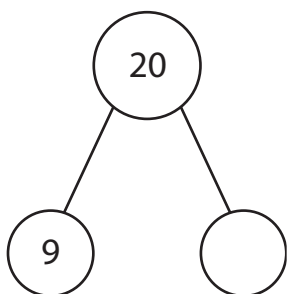
___ + ___ = ___

___ + ___ = ___

___ - ___ = ___

___ - ___ = ___

4)



___ + ___ = ___

___ + ___ = ___

___ - ___ = ___

___ - ___ = ___

___ + ___ = ___

___ + ___ = ___

___ - ___ = ___

___ - ___ = ___

___ + ___ = ___

___ + ___ = ___

___ - ___ = ___

___ - ___ = ___

PREVIEW

Gain complete access to the largest collection of worksheets in all subjects!

Members, please log in to download this worksheet.

Not a member? Please sign up to gain complete access.

www.mathworksheets4kids.com