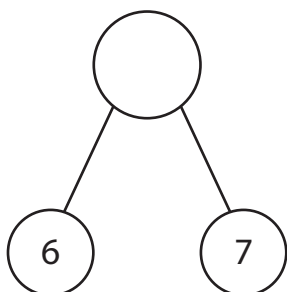


# Fact Family - Addition & Subtraction

Find the missing number in each number bond and write four different facts.

1)



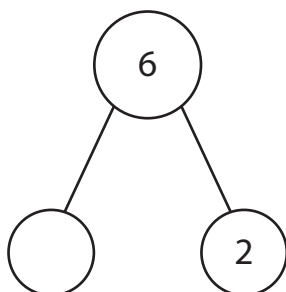
\_\_\_ + \_\_\_ = \_\_\_

\_\_\_ + \_\_\_ = \_\_\_

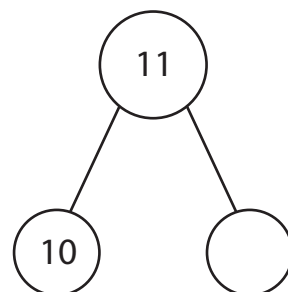
\_\_\_ - \_\_\_ = \_\_\_

\_\_\_ - \_\_\_ = \_\_\_

2)



3)



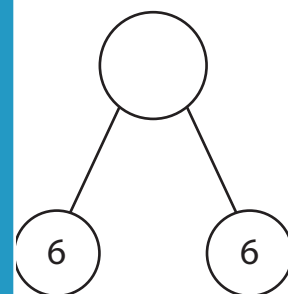
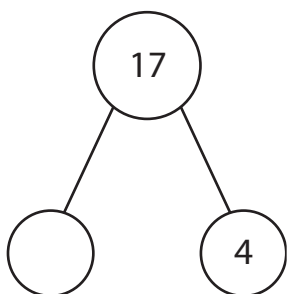
\_\_\_ + \_\_\_ = \_\_\_

\_\_\_ + \_\_\_ = \_\_\_

\_\_\_ - \_\_\_ = \_\_\_

\_\_\_ - \_\_\_ = \_\_\_

4)



\_\_\_ + \_\_\_ = \_\_\_

\_\_\_ + \_\_\_ = \_\_\_

\_\_\_ - \_\_\_ = \_\_\_

\_\_\_ - \_\_\_ = \_\_\_

\_\_\_ + \_\_\_ = \_\_\_

\_\_\_ + \_\_\_ = \_\_\_

\_\_\_ - \_\_\_ = \_\_\_

\_\_\_ - \_\_\_ = \_\_\_

\_\_\_ + \_\_\_ = \_\_\_

\_\_\_ + \_\_\_ = \_\_\_

\_\_\_ - \_\_\_ = \_\_\_

\_\_\_ - \_\_\_ = \_\_\_

## PREVIEW

Gain complete access to the largest collection of worksheets in all subjects!

Members, please log in to download this worksheet.

Not a member? Please sign up to gain complete access.

[www.mathworksheets4kids.com](http://www.mathworksheets4kids.com)