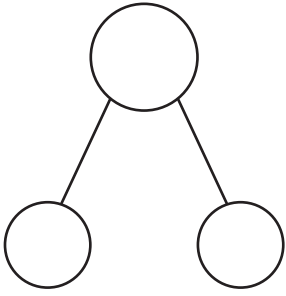


Name : \_\_\_\_\_

## Fact Family - Addition & Subtraction

1)



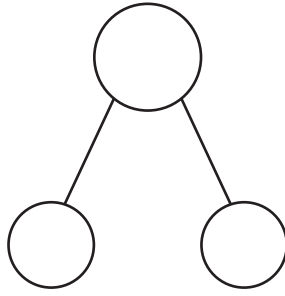
$___ + ___ = ___$

$___ + ___ = ___$

$___ - ___ = ___$

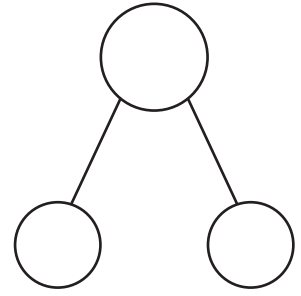
$___ - ___ = ___$

2)



$___ + ___ = ___$

3)



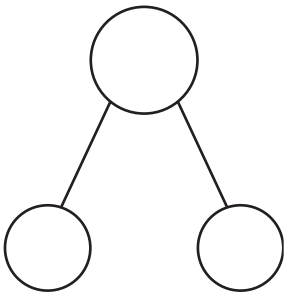
$___ + ___ = ___$

$___ + ___ = ___$

$___ - ___ = ___$

$___ - ___ = ___$

4)



$___ + ___ = ___$

$___ + ___ = ___$

$___ - ___ = ___$

$___ - ___ = ___$

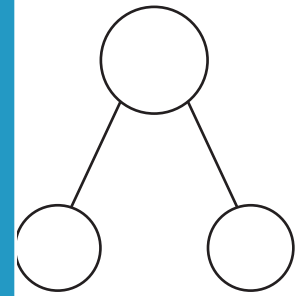
# PREVIEW

Gain complete access to the largest collection of worksheets in all subjects!

Members, please log in to download this worksheet.

Not a member? Please sign up to gain complete access.

[www.mathworksheets4kids.com](http://www.mathworksheets4kids.com)



$___ + ___ = ___$

$___ + ___ = ___$

$___ - ___ = ___$

$___ - ___ = ___$