


Fact Family - Multiplication & Division


Write a fact family to represent each array.

1)




_____ × _____ = _____
 _____ × _____ = _____
 _____ ÷ _____ = _____
 _____ ÷ _____ = _____

2)




_____ = _____
 _____ = _____
 _____ = _____
 _____ = _____

3)



_____ × _____ = _____
 _____ × _____ = _____
 _____ ÷ _____ = _____
 _____ ÷ _____ = _____



_____ × _____ = _____
 _____ × _____ = _____
 _____ ÷ _____ = _____
 _____ ÷ _____ = _____

PREVIEW

Gain complete access to the largest collection of worksheets in all subjects!

Members, please log in to download this worksheet.


Not a member? Please sign up to gain complete access.

www.mathworksheets4kids.com

Fact Family - Multiplication & Division

Write a fact family to represent each array.

1)




$$\underline{2} \times \underline{4} = \underline{8}$$

$$\underline{4} \times \underline{2} = \underline{8}$$

$$\underline{8} \div \underline{4} = \underline{2}$$

$$\underline{8} \div \underline{2} = \underline{4}$$

2)




$$\underline{5} \times \underline{6} = \underline{30}$$

$$\underline{6} \times \underline{5} = \underline{30}$$

$$\underline{30} \div \underline{5} = \underline{6}$$

$$\underline{30} \div \underline{6} = \underline{5}$$

3)




$$\underline{4} \times \underline{7} = \underline{28}$$

$$\underline{7} \times \underline{4} = \underline{28}$$

$$\underline{28} \div \underline{7} = \underline{4}$$

$$\underline{28} \div \underline{4} = \underline{7}$$



$$\underline{2} \times \underline{8} = \underline{16}$$

$$\underline{8} \times \underline{2} = \underline{16}$$

$$\underline{16} \div \underline{8} = \underline{2}$$

$$\underline{16} \div \underline{2} = \underline{8}$$

PREVIEW

Gain complete access to the largest collection of worksheets in all subjects!

Members, please log in to download this worksheet.

Not a member? Please sign up to gain complete access.

www.mathworksheets4kids.com