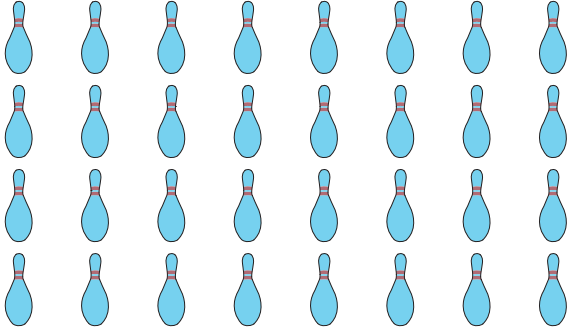



Fact Family - Multiplication & Division

Write a fact family to represent each array.

1)



2)



_____ × _____ = _____

_____ = _____

_____ × _____ = _____

_____ = _____


_____ ÷ _____ = _____

_____ = _____

_____ ÷ _____ = _____

_____ = _____

3)



_____ × _____ = _____

_____ × _____ = _____

_____ × _____ = _____

_____ × _____ = _____

_____ ÷ _____ = _____

_____ ÷ _____ = _____

_____ ÷ _____ = _____

_____ ÷ _____ = _____

PREVIEW

Gain complete access to the largest collection of worksheets in all subjects!

Members, please log in to download this worksheet.

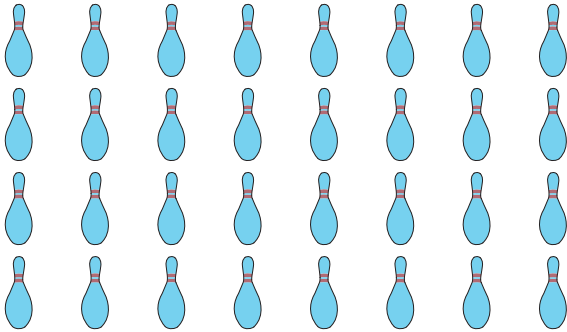
Not a member? Please sign up to gain complete access.

www.mathworksheets4kids.com

Fact Family - Multiplication & Division

Write a fact family to represent each array.

1)



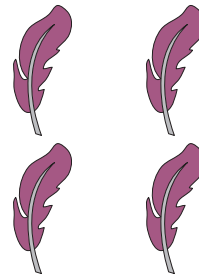
$$\underline{4} \times \underline{8}$$

$$\underline{8} \times \underline{4}$$

$$\underline{32} \div \underline{8}$$

$$\underline{32} \div \underline{4}$$

2)




$$\underline{2} = \underline{4}$$

$$\underline{2} = \underline{4}$$

$$\underline{2} = \underline{2}$$

$$\underline{2} = \underline{2}$$

3)




$$\underline{3} \times \underline{7} = \underline{21}$$

$$\underline{7} \times \underline{3} = \underline{21}$$

$$\underline{21} \div \underline{7} = \underline{3}$$

$$\underline{21} \div \underline{3} = \underline{7}$$



$$\underline{5} \times \underline{3} = \underline{15}$$

$$\underline{3} \times \underline{5} = \underline{15}$$

$$\underline{15} \div \underline{3} = \underline{5}$$

$$\underline{15} \div \underline{5} = \underline{3}$$

PREVIEW

Gain complete access to the largest collection of worksheets in all subjects!

Members, please log in to download this worksheet.

Not a member? Please sign up to gain complete access.

www.mathworksheets4kids.com