

Prime Factor Tree

ES2

Draw a prime factor tree for each number.

1) 30

2) 18

3) 28

5) 42

PREVIEW

Gain complete access to the largest
collection of worksheets in all subjects!

Members, please
log in to
download this
worksheet.

Not a member?
Please sign up to
gain complete
access.

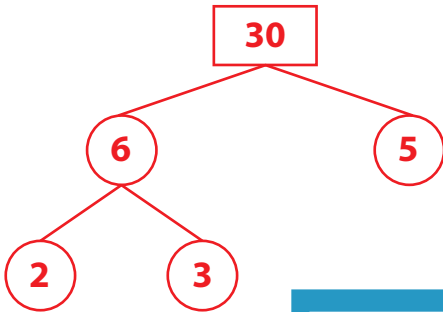
www.mathworksheets4kids.com

Answer key**Prime Factor Tree**

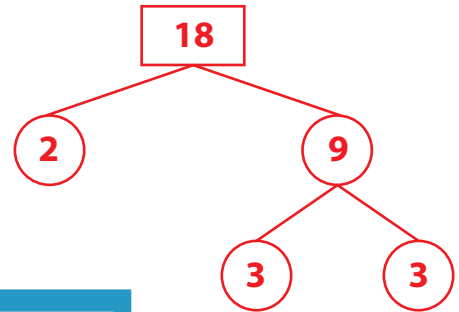
ES2

Draw a prime factor tree for each number. (diagrammatic representation may vary)

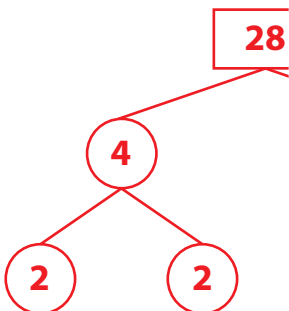
1) 30



2) 18



3) 28



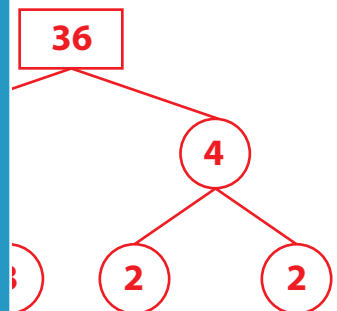
PREVIEW

Gain complete access to the largest collection of worksheets in all subjects!

Members, please log in to download this worksheet.

Not a member? Please sign up to gain complete access.

www.mathworksheets4kids.com



5) 42

