

**Prime Factor Tree**

MS2

Draw a prime factor tree for each number.

1) 98

2) 70

3) 84

5) 44

# PREVIEW

Gain complete access to the largest  
collection of worksheets in all subjects!

Members, please  
log in to  
download this  
worksheet.

Not a member?  
Please sign up to  
gain complete  
access.

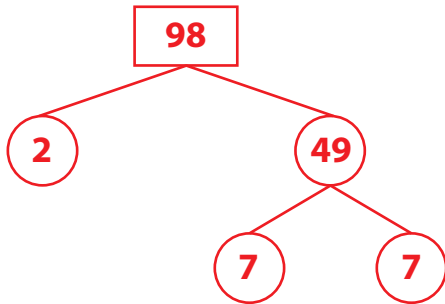
[www.mathworksheets4kids.com](http://www.mathworksheets4kids.com)

**Prime Factor Tree**

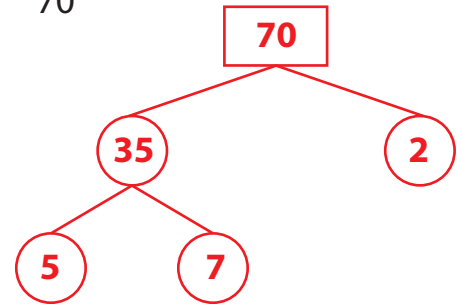
MS2

Draw a prime factor tree for each number. (diagrammatic representation may vary)

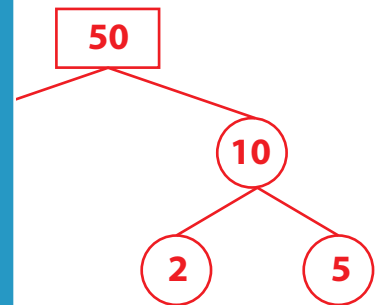
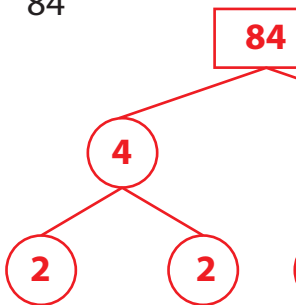
1) 98



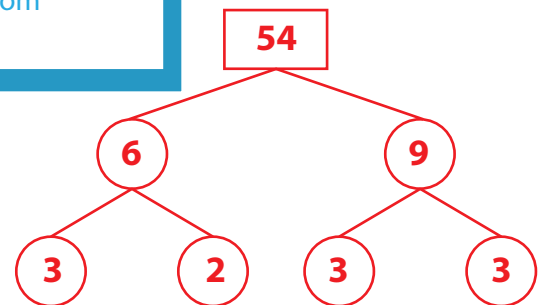
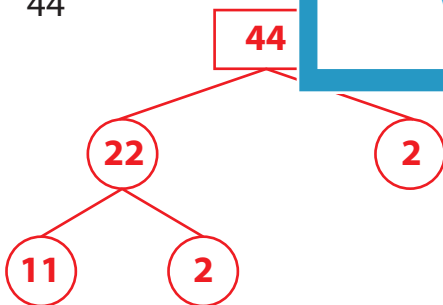
2) 70



3) 84



5) 44

**PREVIEW**

Gain complete access to the largest collection of worksheets in all subjects!

Members, please log in to download this worksheet.

Not a member? Please sign up to gain complete access.

[www.mathworksheets4kids.com](http://www.mathworksheets4kids.com)