

**Prime Factor Tree**

MS3

Draw a prime factor tree for each number.

1) 80

2) 52

3) 72

5) 60

# PREVIEW

Gain complete access to the largest  
collection of worksheets in all subjects!

Members, please  
log in to  
download this  
worksheet.

Not a member?  
Please sign up to  
gain complete  
access.

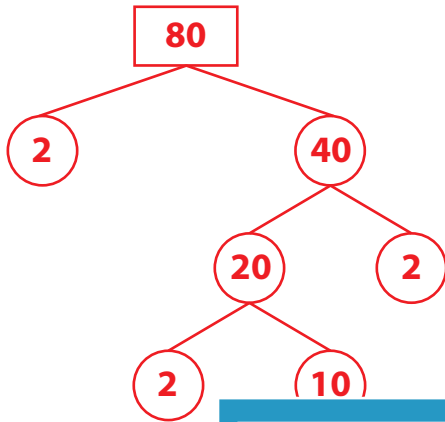
[www.mathworksheets4kids.com](http://www.mathworksheets4kids.com)

**Prime Factor Tree**

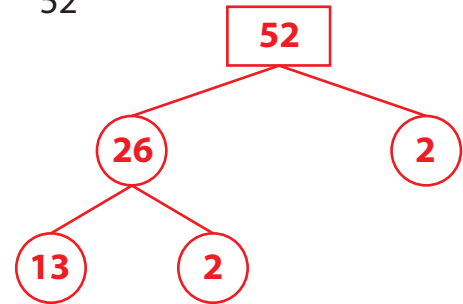
MS3

Draw a prime factor tree for each number. (diagrammatic representation may vary)

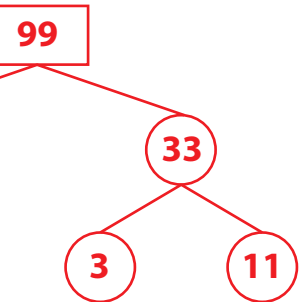
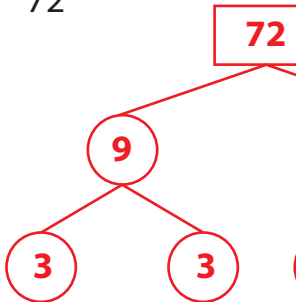
1) 80



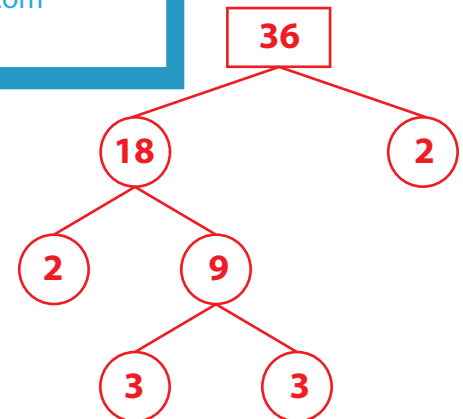
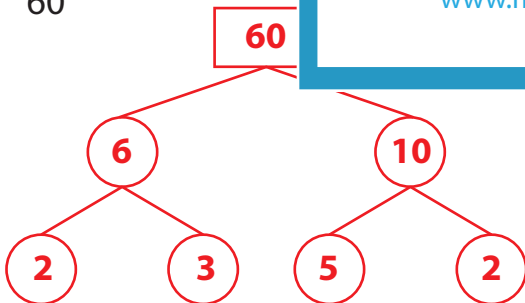
2) 52



3) 72



5) 60

**PREVIEW**Gain complete access to the largest  
collection of worksheets in all subjects!Members, please  
log in to  
download this  
worksheet.Not a member?  
Please sign up to  
gain complete  
access.[www.mathworksheets4kids.com](http://www.mathworksheets4kids.com)