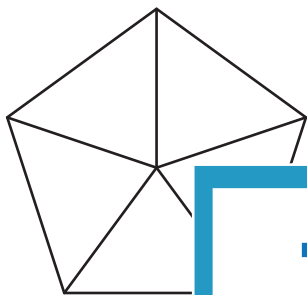


Name : _____

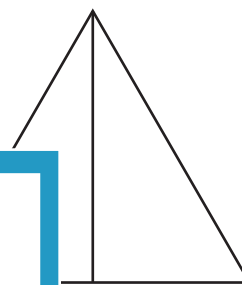
Representing Fractions on Models

Color the model to represent each fraction.

1) $\frac{3}{5}$



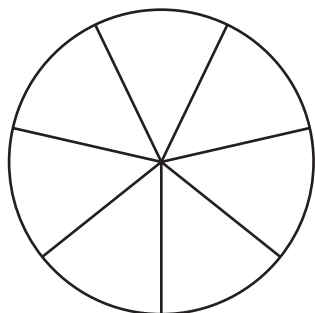
2) $\frac{1}{2}$




3) $\frac{2}{4}$



5) $\frac{4}{7}$



6



PREVIEW

Gain complete access to the largest collection of worksheets in all subjects!

Members, please log in to download this worksheet.

Not a member? Please sign up to gain complete access.

www.mathworksheets4kids.com