

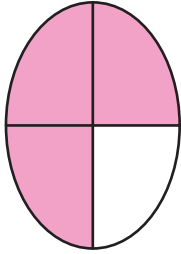
Name : _____

Part of a Whole

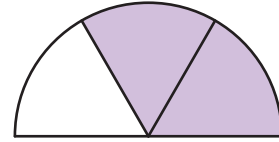
Sheet 1

A) Write what fraction of each shape is shaded.


1)



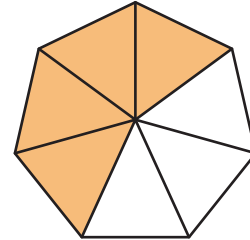
2)




3)



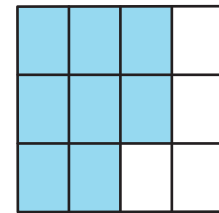
4)



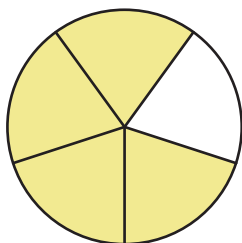
5)



6)



B) Check the fraction represented by the model.



a) $\frac{1}{5}$

b) $\frac{4}{7}$

c) $\frac{4}{5}$

d) $\frac{2}{5}$