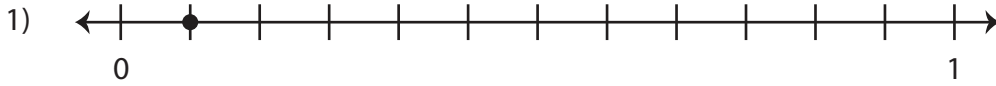
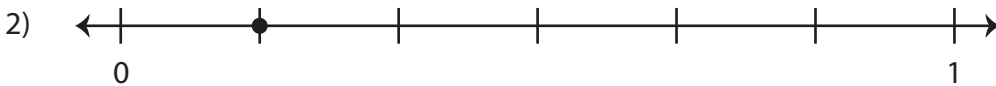


Identifying Unit Fractions

A) What fraction does the dot on the number line represent?









PREVIEW

Gain complete access to the largest collection of worksheets in all subjects!

Members, please log in to download this worksheet.

Not a member? Please sign up to gain complete access.


www.mathworksheets4kids.com

B) Write the fraction



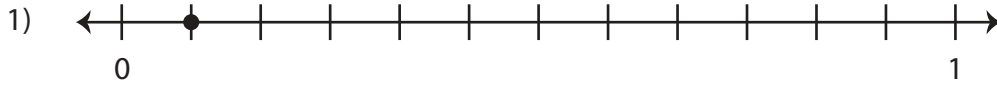




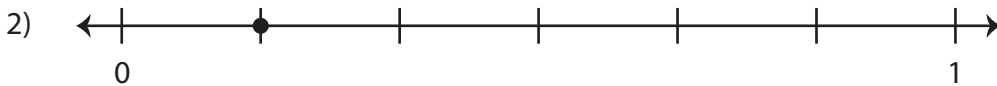


Identifying Unit Fractions

A) What fraction does the dot on the number line represent?



$\frac{1}{12}$



$\frac{1}{6}$



$\frac{1}{2}$



$\frac{1}{10}$

PREVIEW

Gain complete access to the largest collection of worksheets in all subjects!

Members, please log in to download this worksheet.

Not a member? Please sign up to gain complete access.

www.mathworksheets4kids.com

B) Write the fraction




$\frac{1}{8}$



$\frac{1}{9}$



$\frac{1}{3}$



$\frac{1}{11}$