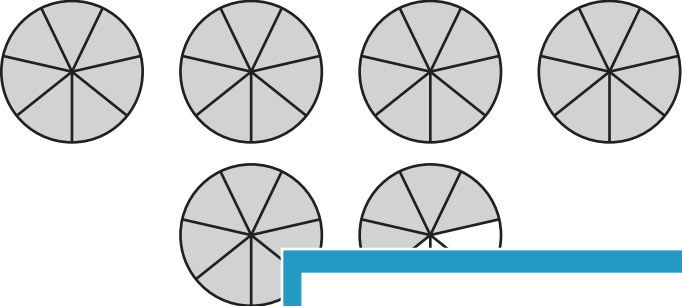
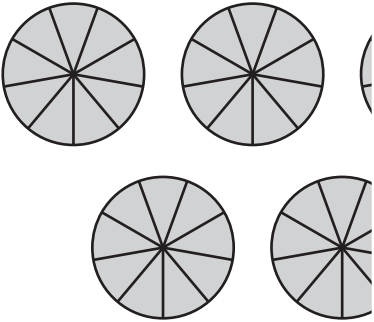
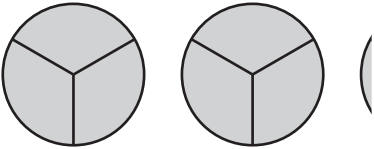
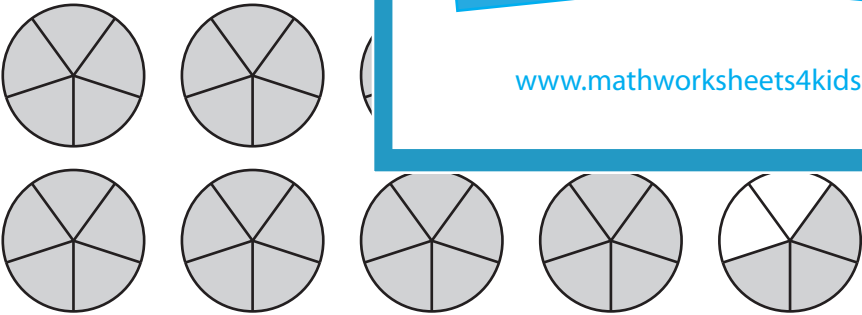
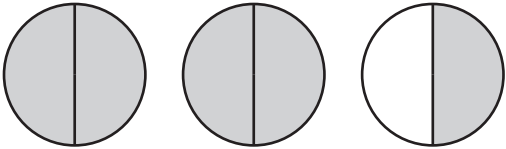


Name : _____

Converting Improper Fractions and Mixed Numbers

Shade the pies to represent the specified fraction or mixed number, and complete the table.

Visual Representation	Improper Fraction	Mixed Number
	$\frac{39}{7}$	
		$8\frac{5}{9}$
		
		$9\frac{3}{5}$
	$\frac{5}{2}$	

PREVIEW

Gain complete access to the largest collection of worksheets in all subjects!

Members, please log in to download this worksheet.

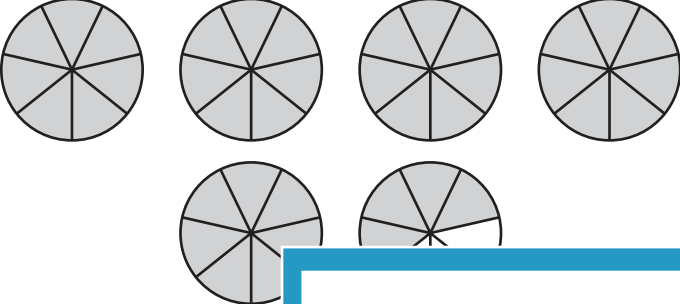
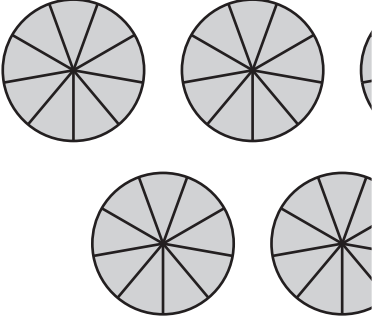
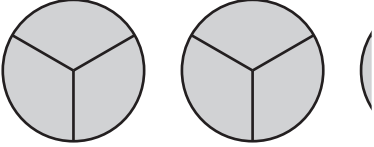
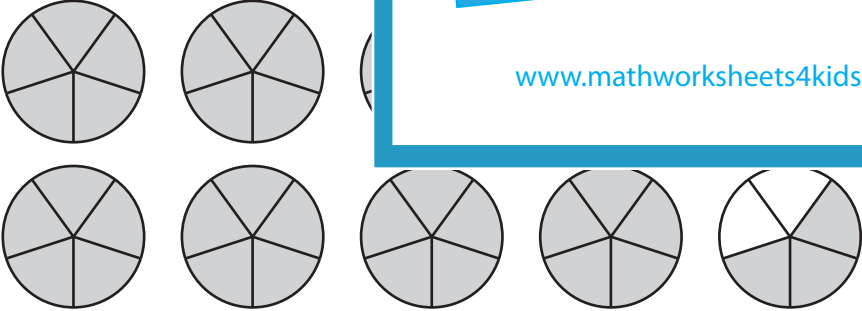
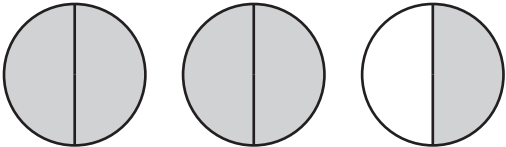
Not a member? Please sign up to gain complete access.

www.mathworksheets4kids.com

Name : _____

Converting Improper Fractions and Mixed Numbers

Shade the pies to represent the specified fraction or mixed number, and complete the table.

Visual Representation	Improper Fraction	Mixed Number
	$\frac{39}{7}$	$5 \frac{4}{7}$
	$\frac{50}{9}$	$5 \frac{5}{9}$
	$\frac{8}{3}$	$2 \frac{2}{3}$
	$\frac{48}{5}$	$9 \frac{3}{5}$
	$\frac{5}{2}$	$2 \frac{1}{2}$

PREVIEW

Gain complete access to the largest collection of worksheets in all subjects!

Members, please log in to download this worksheet.

Not a member? Please sign up to gain complete access.

www.mathworksheets4kids.com