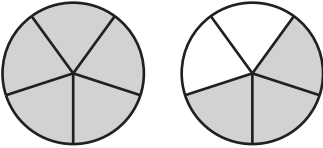
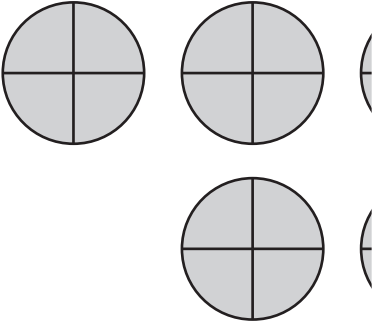
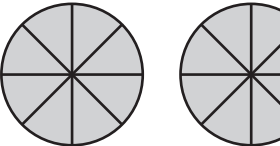
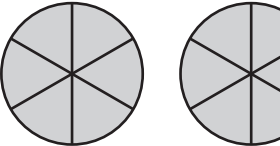
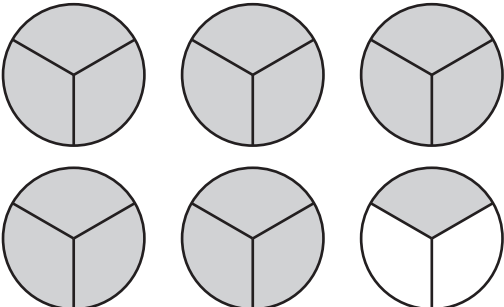


Name : _____

Converting Improper Fractions and Mixed Numbers

Sheet 2

Shade the pies to represent the specified fraction or mixed number, and complete the table.

Visual Representation	Improper Fraction	Mixed Number
		$1 \frac{3}{5}$
		
		$3 \frac{5}{8}$
		
		$5 \frac{1}{3}$

PREVIEW

Gain complete access to the largest collection of worksheets in all subjects!

Members, please log in to download this worksheet.

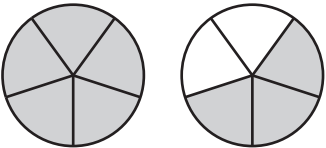
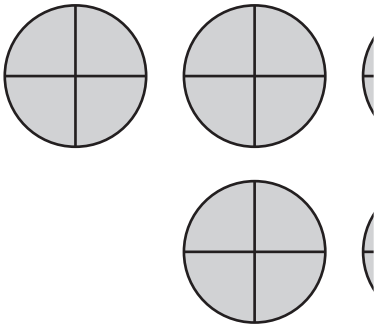
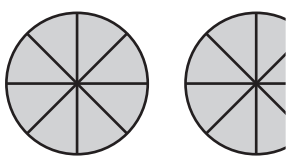
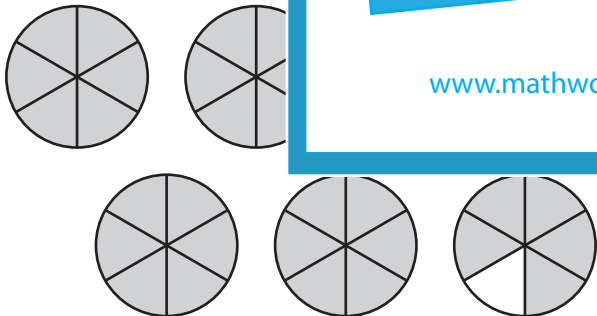
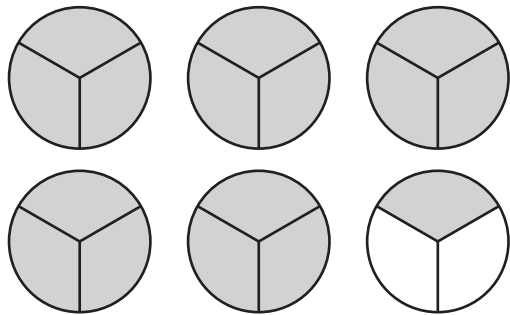
Not a member? Please sign up to gain complete access.

www.mathworksheets4kids.com

Name : _____

Converting Improper Fractions and Mixed Numbers

Shade the pies to represent the specified fraction or mixed number, and complete the table.

Visual Representation	Improper Fraction	Mixed Number
	$\frac{8}{5}$	$1\frac{3}{5}$
	$7\frac{3}{4}$	
	$3\frac{5}{8}$	
	$6\frac{5}{6}$	
	$\frac{16}{3}$	$5\frac{1}{3}$

PREVIEW

Gain complete access to the largest collection of worksheets in all subjects!

Members, please log in to download this worksheet.

Not a member? Please sign up to gain complete access.

www.mathworksheets4kids.com