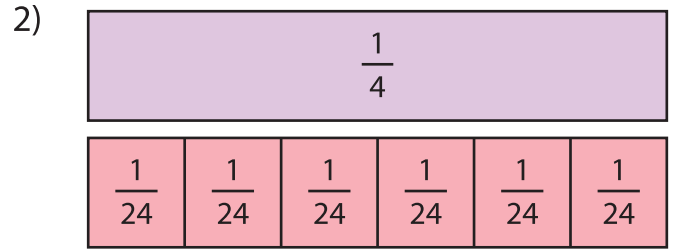
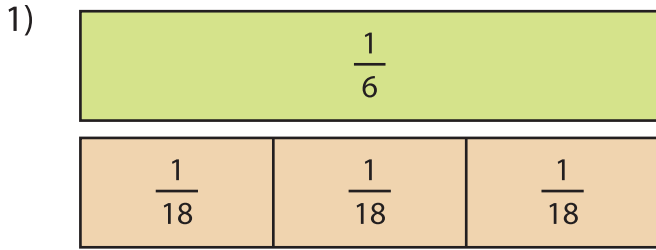


Name: _____

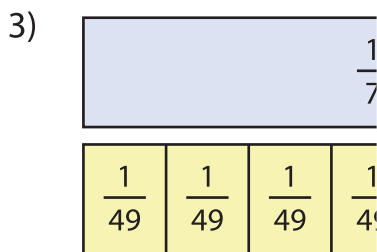
Dividing Unit Fractions by Whole Numbers

Models: S2

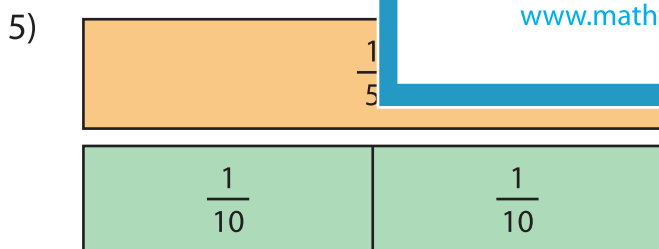
Divide the unit fractions by whole numbers using the models given.



$$\frac{1}{6} \div 3 = \underline{\hspace{2cm}}$$



$$\frac{1}{7} \div 7 = \underline{\hspace{2cm}}$$



$$\frac{1}{5} \div 2 = \underline{\hspace{2cm}}$$

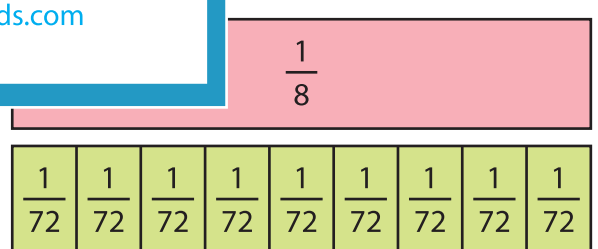
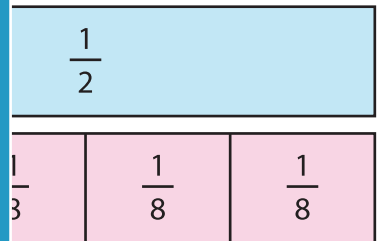
PREVIEW

Gain complete access to the largest collection of worksheets in all subjects!

Members, please log in to download this worksheet.

Not a member? Please sign up to gain complete access.

www.mathworksheets4kids.com



$$\frac{1}{8} \div 9 = \underline{\hspace{2cm}}$$