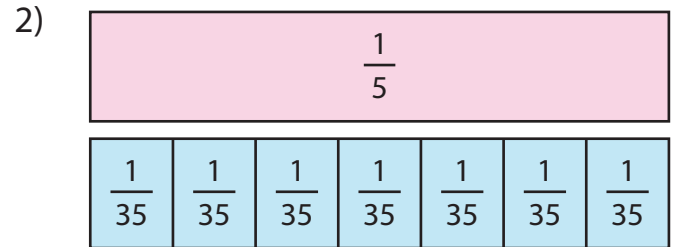
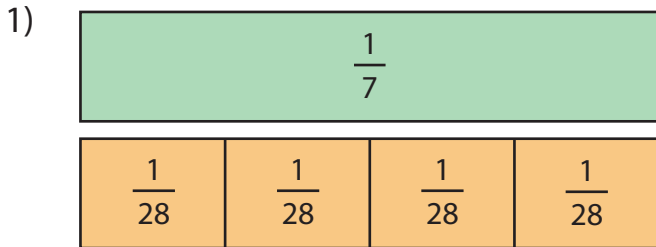


Name: \_\_\_\_\_

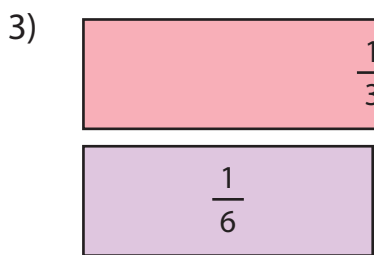
## Dividing Unit Fractions by Whole Numbers

Models: S3

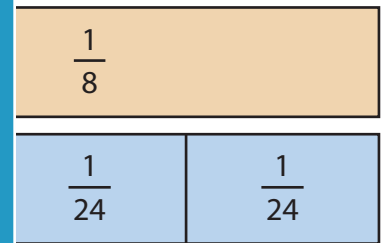
Divide the unit fractions by whole numbers using the models given.



$$\frac{1}{7} \div 4 = \underline{\hspace{2cm}}$$



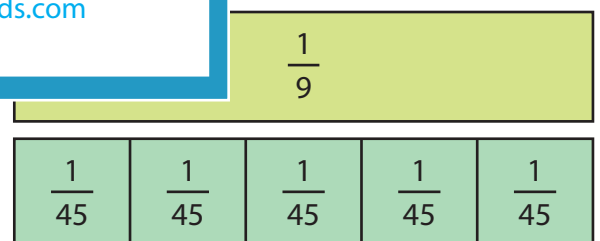
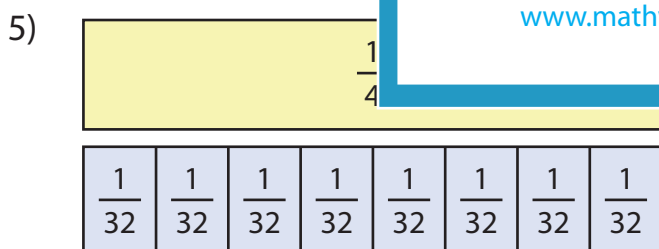
Gain complete access to the largest collection of worksheets in all subjects!



$$\frac{1}{3} \div 2 = \underline{\hspace{2cm}}$$

Members, please log in to download this worksheet.

Not a member? Please sign up to gain complete access.

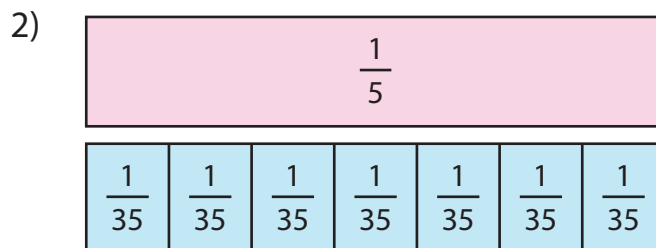
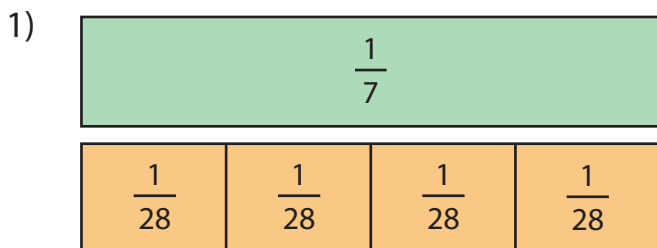


$$\frac{1}{4} \div 8 = \underline{\hspace{2cm}}$$

$$\frac{1}{9} \div 5 = \underline{\hspace{2cm}}$$

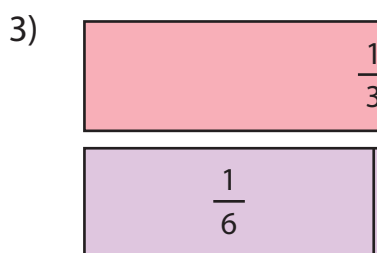
## Dividing Unit Fractions by Whole Numbers

Divide the unit fractions by whole numbers using the models given.



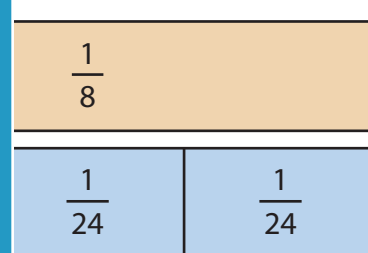
$$\frac{1}{7} \div 4 = \underline{\hspace{2cm}}$$

$$\underline{\hspace{2cm}} \frac{1}{35}$$



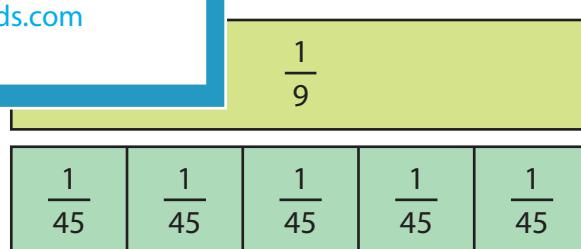
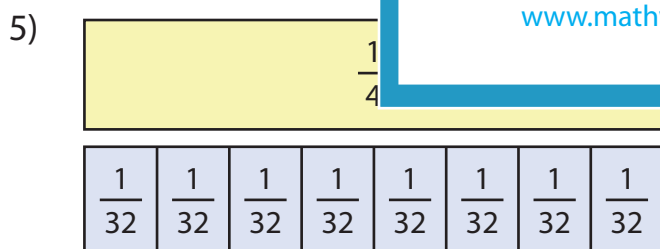
**PREVIEW**

Gain complete access to the largest collection of worksheets in all subjects!



$$\frac{1}{3} \div 2 = \underline{\hspace{2cm}}$$

$$\underline{\hspace{2cm}} \frac{1}{24}$$



$$\frac{1}{4} \div 8 = \underline{\hspace{2cm}} \frac{1}{32}$$

$$\frac{1}{9} \div 5 = \underline{\hspace{2cm}} \frac{1}{45}$$