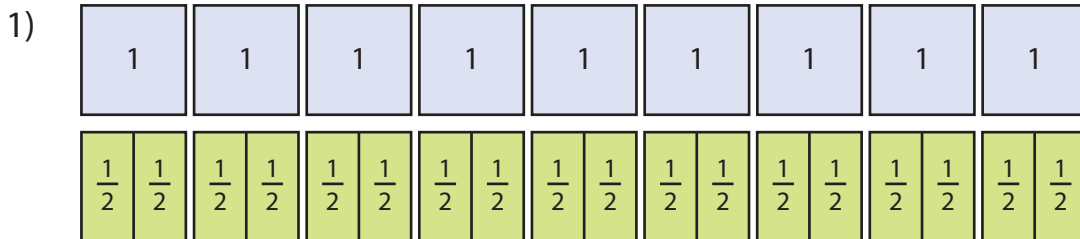


Name: \_\_\_\_\_

## Dividing Whole Numbers by Unit Fractions

Models: S2

Divide the whole numbers by unit fractions using the models given.



$$9 \div \frac{1}{2} = \boxed{\phantom{00}}$$



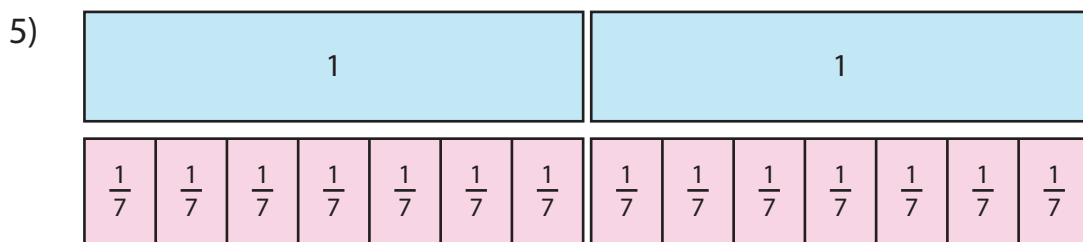
$$4 \div \frac{1}{6} = \boxed{\phantom{00}}$$



$$1 \div \frac{1}{9} = \boxed{\phantom{00}}$$



$$5 \div \frac{1}{5} = \boxed{\phantom{00}}$$



$$2 \div \frac{1}{7} = \boxed{\phantom{00}}$$

**PREVIEW**

Gain complete access to the largest collection of worksheets in all subjects!

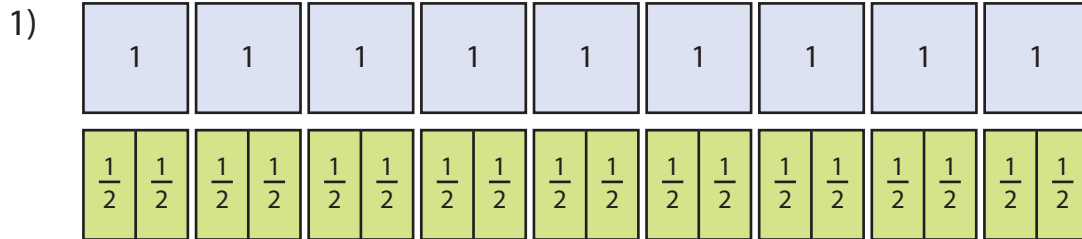
Members, please log in to download this worksheet.

Not a member? Please sign up to gain complete access.

[www.mathworksheets4kids.com](http://www.mathworksheets4kids.com)

## Dividing Whole Numbers by Unit Fractions

Divide the whole numbers by unit fractions using the models given.



$$9 \div \frac{1}{2} = \boxed{18}$$



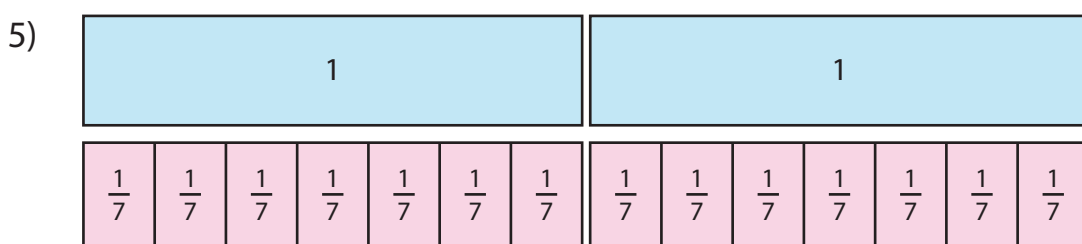
$$4 \div \frac{1}{6} = \boxed{24}$$



$$1 \div \frac{1}{9} = \boxed{9}$$



$$5 \div \frac{1}{5} = \boxed{25}$$



$$2 \div \frac{1}{7} = \boxed{14}$$

# PREVIEW

Gain complete access to the largest collection of worksheets in all subjects!

Members, please log in to download this worksheet.

Not a member? Please sign up to gain complete access.

[www.mathworksheets4kids.com](http://www.mathworksheets4kids.com)