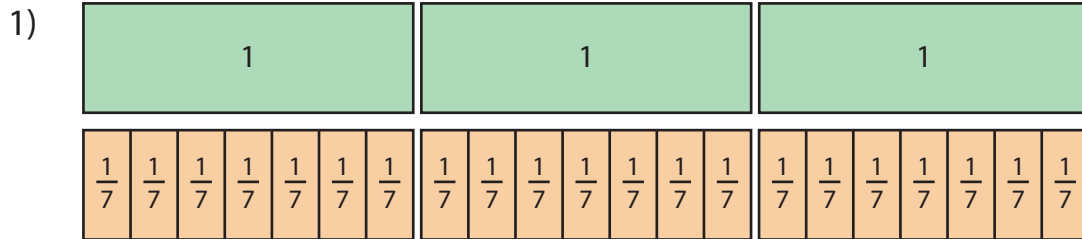


## Dividing Whole Numbers by Unit Fractions

Divide the whole numbers by unit fractions using the models given.



$$3 \div \frac{1}{7} = \square$$



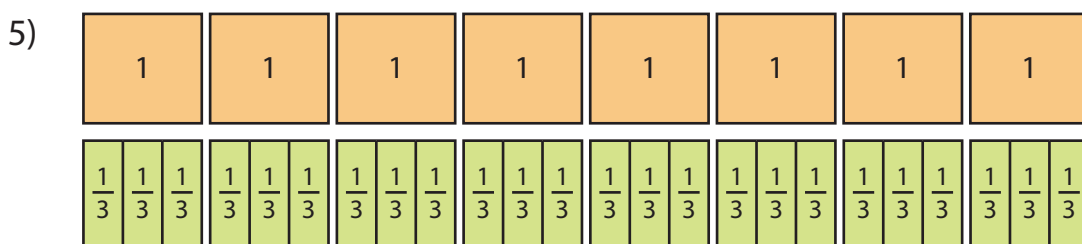
$$5 \div \frac{1}{4} = \square$$



$$7 \div \frac{1}{2} = \square$$



$$1 \div \frac{1}{8} = \square$$



$$8 \div \frac{1}{3} = \square$$

**PREVIEW**

Gain complete access to the largest collection of worksheets in all subjects!

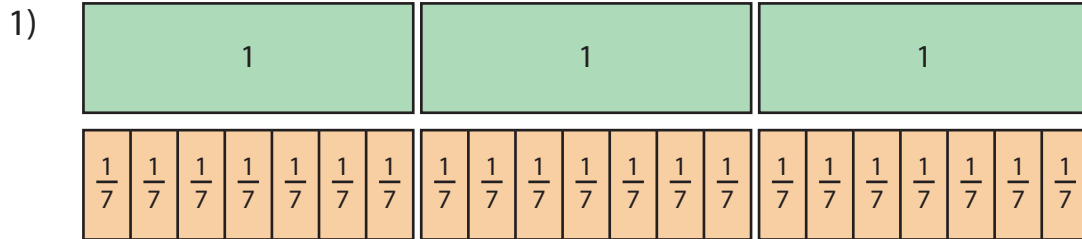
Members, please log in to download this worksheet.

Not a member? Please sign up to gain complete access.

[www.mathworksheets4kids.com](http://www.mathworksheets4kids.com)

## Dividing Whole Numbers by Unit Fractions

Divide the whole numbers by unit fractions using the models given.



$$3 \div \frac{1}{7} = \boxed{21}$$



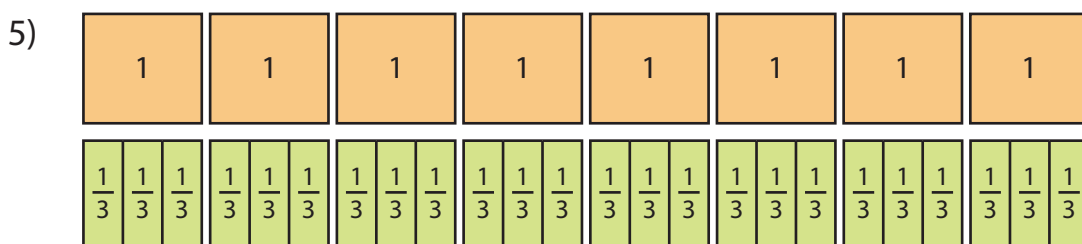
$$5 \div \frac{1}{4} = \boxed{20}$$



$$7 \div \frac{1}{2} = \boxed{14}$$



$$1 \div \frac{1}{8} = \boxed{8}$$



$$8 \div \frac{1}{3} = \boxed{24}$$

**PREVIEW**

Gain complete access to the largest collection of worksheets in all subjects!

Members, please log in to download this worksheet.

Not a member? Please sign up to gain complete access.

[www.mathworksheets4kids.com](http://www.mathworksheets4kids.com)