

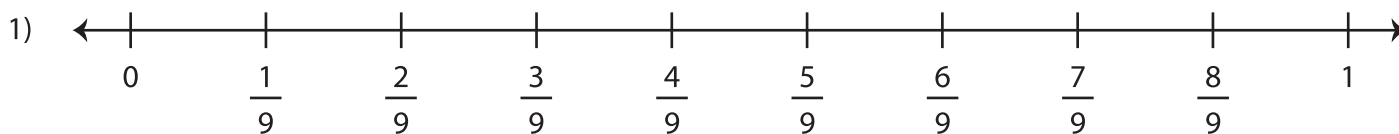


Name : \_\_\_\_\_

## Equivalent Fractions on a Number Line

Sheet 1

Label the number line with fractions. Complete each equivalent fraction sentence using the number lines.



# PREVIEW

Gain complete access to the largest collection of worksheets in all subjects!

Members, please log in to download this worksheet.

Not a member? Please sign up to gain complete access.

[www.mathworksheets4kids.com](http://www.mathworksheets4kids.com)

$$\frac{4}{3} = \frac{\boxed{\phantom{000}}}{6}$$