
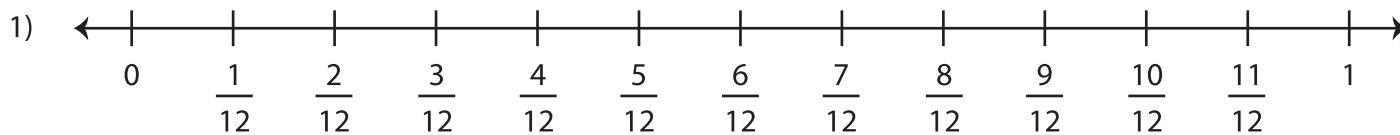


Equivalent Fractions on a Number Line

Label the number line with fractions. Complete each equivalent fraction sentence using the number lines.




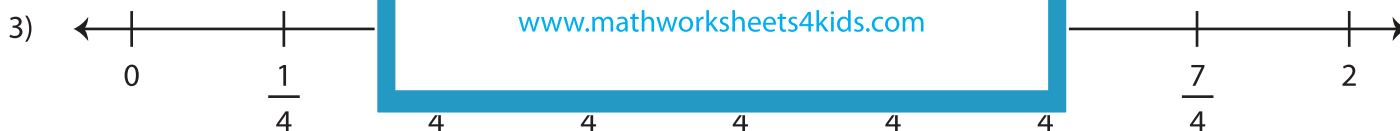
PREVIEW

Gain complete access to the largest collection of worksheets in all subjects!

Members, please log in to download this worksheet.

Not a member? Please sign up to gain complete access.

www.mathworksheets4kids.com



$$\frac{6}{4} = \frac{\boxed{}}{6}$$