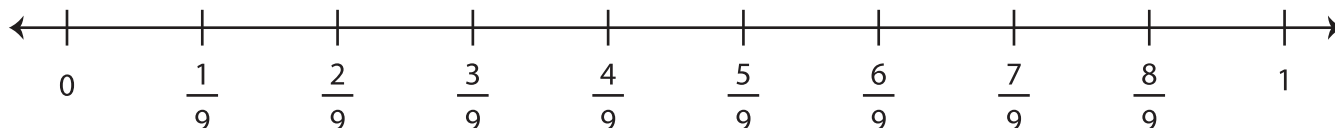
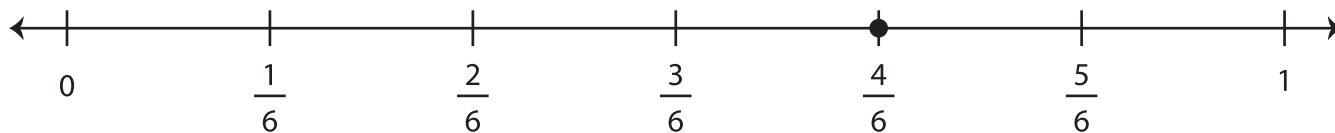


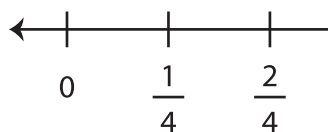

Equivalent Fractions on a Number Line

Find the fraction that is equivalent to each given fraction using the number line.

1) $\frac{4}{6} =$



2) $\frac{5}{2} =$



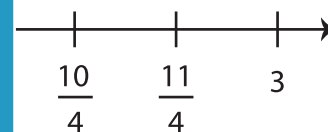

PREVIEW

Gain complete access to the largest
collection of worksheets in all subjects!


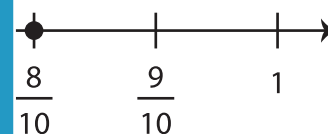

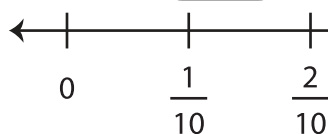
Members, please
log in to
download this
worksheet.

Not a member?
Please sign up to
gain complete
access.

www.mathworksheets4kids.com



3) $\frac{8}{10} =$



4) $\frac{2}{8} =$

