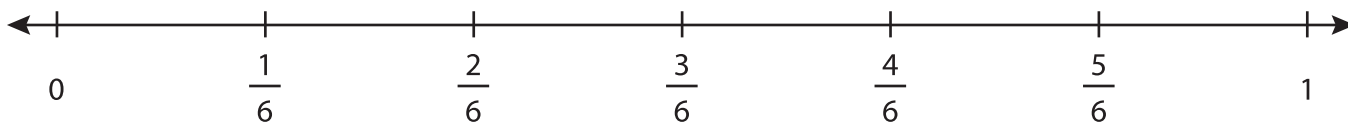


Name : _____

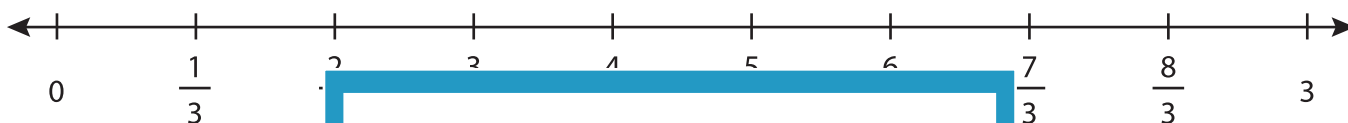
Equivalent Fractions on a Number Line

Sheet 2

- 1) Find the fraction equivalent to $\frac{1}{3}$ and plot it on the number line.



- 2) Find the fraction equivalent to 2 and plot it on the number line.



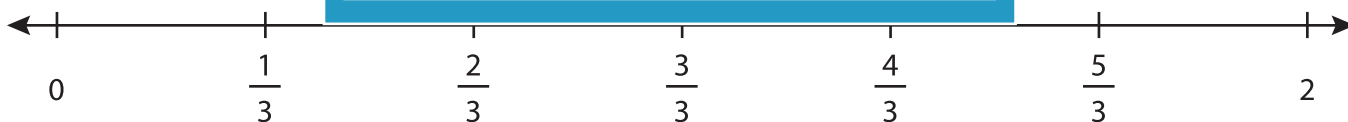
- 3) Find the fraction equivalent to $\frac{1}{2}$ and plot it on the number line.



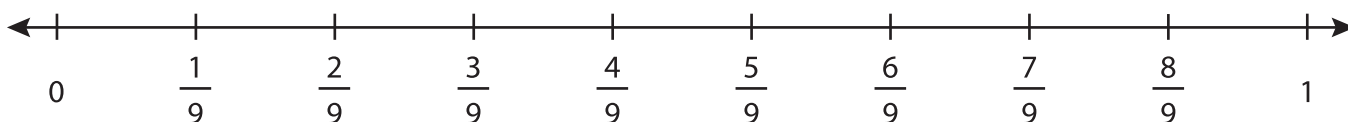
- 4) Find the fraction equivalent to $\frac{1}{4}$ and plot it on the number line.



- 5) Find the fraction equivalent to $\frac{1}{2}$ and plot it on the number line.



- 6) Find the fraction equivalent to $\frac{2}{3}$ and plot it on the number line.



PREVIEW

Gain complete access to the largest collection of worksheets in all subjects!

Members, please log in to download this worksheet.

Not a member? Please sign up to gain complete access.

www.mathworksheets4kids.com