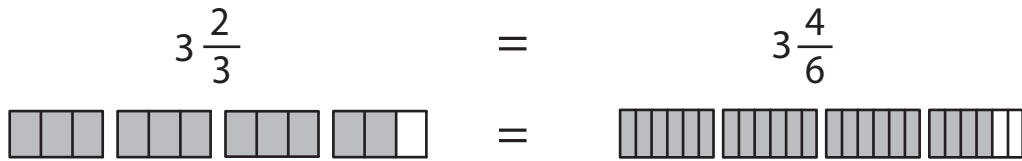


Name : _____

Equivalent Fractions

Mixed Numbers: S3

Example:



Shade the fraction bars for the given equivalent fractions.

1) $1\frac{7}{14} = 1\frac{5}{10}$



2) $2 = 2\frac{2}{8}$



3) $1 = 1\frac{8}{18}$



4) $2 = 2\frac{5}{6}$



5) $1\frac{8}{16} = 1\frac{7}{14}$



=



6) $3\frac{2}{3} = 3\frac{4}{6}$



=



PREVIEW

Gain complete access to the largest collection of worksheets in all subjects!

Members, please log in to download this worksheet.

Not a member? Please sign up to gain complete access.

www.mathworksheets4kids.com

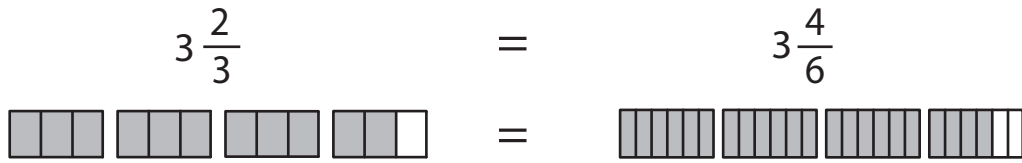
Name : _____

Answer Key

Equivalent Fractions

Mixed Numbers: S3

Example:



Shade the fraction bars for the given equivalent fractions.

1) $1\frac{7}{14} = 1\frac{5}{10}$



2) $2\frac{2}{8}$



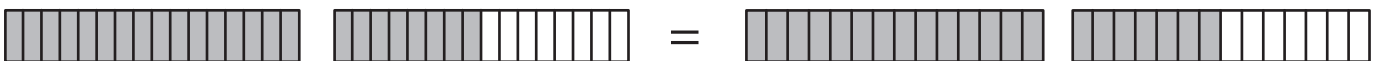
3) $1\frac{8}{18}$



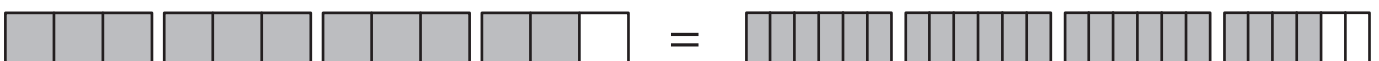
4) $2\frac{5}{6}$



5) $1\frac{8}{16} = 1\frac{7}{14}$



6) $3\frac{2}{3} = 3\frac{4}{6}$



PREVIEW

Gain complete access to the largest collection of worksheets in all subjects!

Members, please log in to download this worksheet.

Not a member? Please sign up to gain complete access.

www.mathworksheets4kids.com