

Name : _____

Equivalent Fractions

Improper Fractions: S5

Example:

$$\frac{35}{15}$$

=

$$\frac{7}{3}$$



=




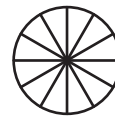
Shade the pie models to represent the equivalent fractions.

1)

$$\frac{56}{10}$$

=

$$\frac{42}{12}$$

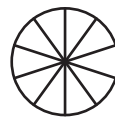


2)

$$\frac{1}{5}$$

Gain complete access to the largest collection of worksheets in all subjects!

$$\frac{22}{10}$$




3)

$$\frac{2}{8}$$

Members, please log in to download this worksheet.

Not a member? Please sign up to gain complete access.

$$\frac{44}{16}$$



4)


$$\frac{3}{14}$$

www.mathworksheets4kids.com

$$\frac{10}{4}$$



=

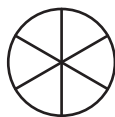
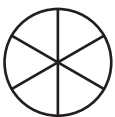


5)

$$\frac{24}{6}$$

=

$$\frac{60}{15}$$



=



Name : _____

Answer Key

Equivalent Fractions

Improper Fractions: S5

Example:

$$\frac{35}{15}$$

=

$$\frac{7}{3}$$



=



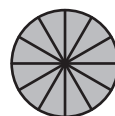
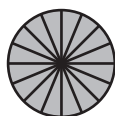
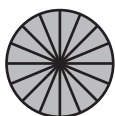
Shade the pie models to represent the equivalent fractions.

1)

$$\frac{56}{10}$$

=

$$\frac{42}{12}$$

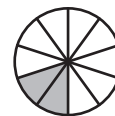
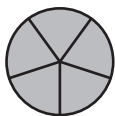


2)

$$\frac{1}{5}$$

Gain complete access to the largest collection of worksheets in all subjects!

$$\frac{22}{10}$$



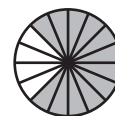
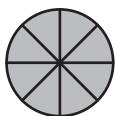
3)

$$\frac{2}{8}$$

Members, please log in to download this worksheet.

Not a member? Please sign up to gain complete access.

$$\frac{44}{16}$$

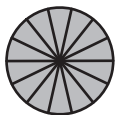


4)

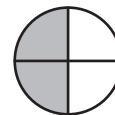
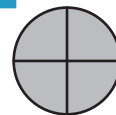

$$\frac{3}{14}$$

www.mathworksheets4kids.com

$$\frac{10}{4}$$



=

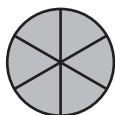
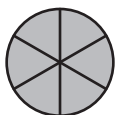
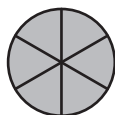
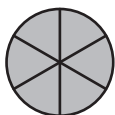


5)

$$\frac{24}{6}$$

=

$$\frac{60}{15}$$



=

