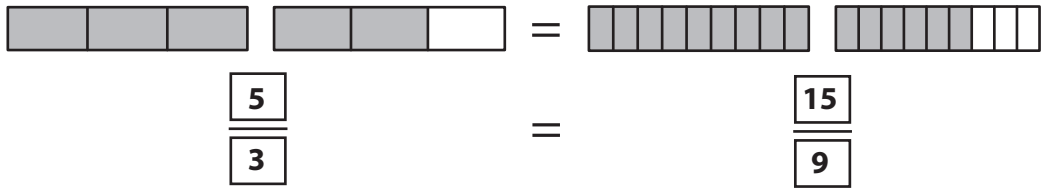


Name : \_\_\_\_\_

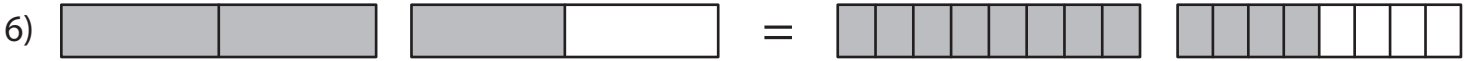
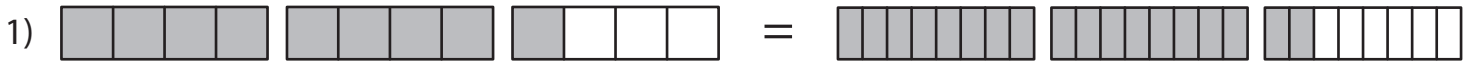
## Equivalent Fractions

Improper Fractions: S1

Example:



Write the equivalent fraction sentence for each pair of fraction bars.



**PREVIEW**

Gain complete access to the largest collection of worksheets in all subjects!

Members, please log in to download this worksheet.

Not a member? Please sign up to gain complete access.

[www.mathworksheets4kids.com](http://www.mathworksheets4kids.com)

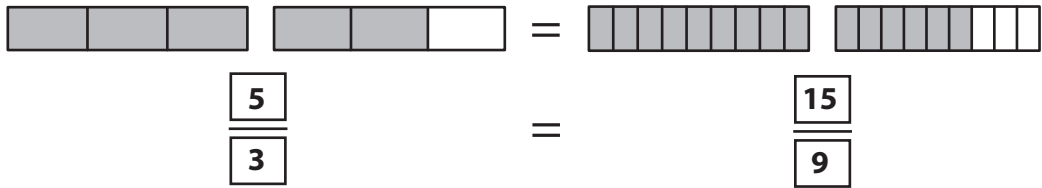
Name : \_\_\_\_\_

## Answer Key

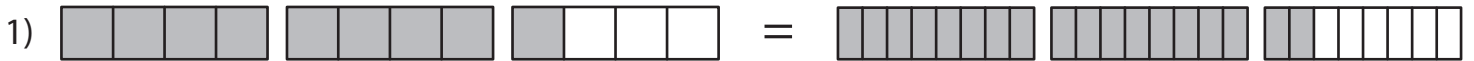
### Equivalent Fractions

Improper Fractions: S1

Example:



Write the equivalent fraction sentence for each pair of fraction bars.



18

8



26

14



21

15



15

6

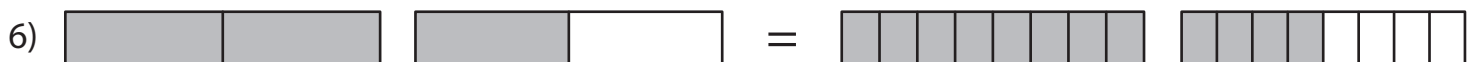


9

18

3

6



3

12

2

8

# PREVIEW

Gain complete access to the largest collection of worksheets in all subjects!

Members, please log in to download this worksheet.

Not a member? Please sign up to gain complete access.

[www.mathworksheets4kids.com](http://www.mathworksheets4kids.com)